



Name _____ Class _____ Date _____

1 Which grade level sold the **most pizzas** for the fundraiser?

A 1
B 2
C 3
D 4

Pizzas Sold for Fund Raiser

Grade	# Sold
1	20
2	25
3	35
4	45

2 How many **sunny days** were there in **September**, according to this pie graph?

A 10
B 5
C 12
D 3

September Weather

Weather	Days
Cloudy	12
Sunny	10
Rainy	5
Windy	3

3 According to this line graph, on what day was the **temperature the lowest**?

A Monday
B Wednesday
C Tuesday
D Friday

Daily Temperatures

Day	Temperature (Degrees)
Monday	50
Tuesday	30
Wednesday	40
Thursday	50
Friday	60

4 If you were to buy **two basketballs**, how much money would you need?

A \$7.00
B \$10.00
C \$30.00
D \$14.00

Item	Price	Quantity in Stock
Skateboard	\$18.00	6
Basketball	\$7.00	7
Tennis Racket	\$21.00	10



PREVIEW

Please [Sign In](#) or [Sign Up](#) to download the printable version of this worksheet

7

A Sam
B Kristol
C Molly
D Molly

of Pies

Owner	# of Pies
Aiden	1
Sam	2
Kristol	1
Molly	2

A Mack's
B Molly's
C Molly's
D Mason's

Present
95

9 How many **brothers** does **Dominic** have?

A 0
B 1
C 2
D 3

Name	Brothers	Sisters
Alanna	1	2
Gina	2	3
Dominic	1	2
Tauer	0	1

10 How many **pies** did **Brian** eat during the pie eating contest?

A 4
B 6
C 8
D 12

Results of Pie Eating Contest

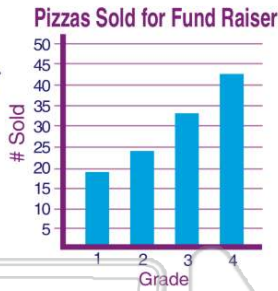
Name	Pies Eaten
Brian	4
Mike	6
Timmy	8
Wayne	4

= 2 Pies Eaten



ANSWER KEY

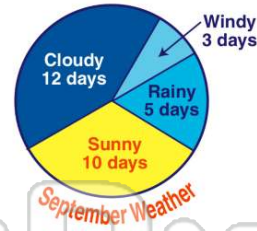
Which grade level sold the **most** pizzas for the fundraiser?



- A 1
- B 2
- C 3
- D 4

(d)

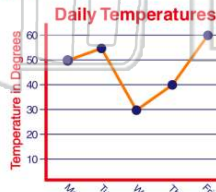
How many **sunny days** were there in **September**, according to this pie graph?



- A 10
- B 5
- C 12
- D 3

(a)

According to this line graph, on what day was the **temperature** the **lowest**?



- A Monday
- B Wednesday
- C Tuesday
- D Friday

(b)

If you were to buy **two** basketballs, how much money would you need?

- A \$7.00
- B \$10.00
- C \$30.00
- D \$14.00

Item	Price	Quantity in Stock
Skateboard	\$18.00	6
Basketball	\$7.00	7
Tennis Racket	\$21.00	10
Checker Game	\$5.00	18

(d)



PREVIEW

Please [Sign In](#) or [Sign Up](#) to download the printable version of this worksheet

D Molly



D Mason's

95

Mary's Attendance in the Fall

How many **brothers** does **Dominic** have?

- A 0
- B 1
- C 2
- D 3

Name	Brothers	Sisters
Alanna	1	2
Gina	2	3
Dominic	1	2
Tauer	0	1

(b)

How many **pies** did **Brian** eat during the pie eating contest?

- A 4
- B 6
- C 8
- D 12



(c)