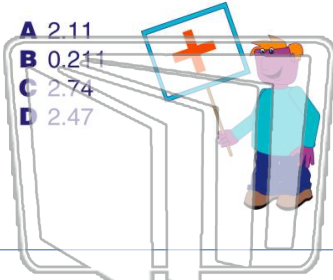




Name _____ Class _____ Date _____

1 Add: $0.07 + 2.4 =$

- A 2.11
- B 0.211
- C 2.74
- D 2.47



2 Add: $.008 + .017 =$

- A .025
- B .25
- C 2.5
- D 0.25



NEW PATH LEARNING

3 Add: $65.004 + 14.013$




4 Add: $1.745 + 0.780$



PREVIEW

Please [Sign In](#) or [Sign Up](#) to download the printable version of this worksheet

- 7
- A 2.066
 - B 8.771
 - C 20.66
 - D 877.1



- A 28.293
- B 75.125
- C 282.93
- D 7.5125

9 Subtract: $8 - 1.98 =$

- A 9.93
- B 6.02
- C 1.90
- D 9.98



10 Subtract: $6.03 - 499 =$

- A 55.31
- B 6.529
- C 65.29
- D 5.531

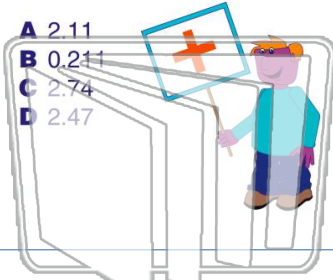




Name _____ Class _____ Date _____

1 Add: $0.07 + 2.4 =$

- A 2.11
- B 0.211
- C 2.74
- D 2.47



2 Add: $.008 + .017 =$

- A .025
- B 25
- C 2.5
- D 0.25



NEW PATH LEARNING

3 Add: $65.004 + 14.013$



4 Add: $1.745 + 0.780$

PREVIEW


Please [Sign In](#) or [Sign Up](#) to download the printable version of this worksheet

5



7

- A 2.066
- B 8.771
- C 20.66
- D 877.1




7 Subtract: $28.293 - 23.410$

- A 28.293
- B 75.125
- C 282.93
- D 7.5125

9 Subtract: $8 - 1.98 =$

- A 9.93
- B 6.02
- C 1.90
- D 9.98



10 Subtract: $6.03 - 499 =$

- A 55.31
- B 6.529
- C 65.29
- D 5.531

