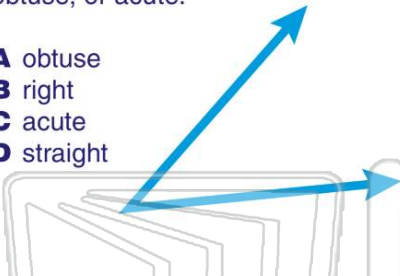




Name \_\_\_\_\_ Class \_\_\_\_\_ Date \_\_\_\_\_

1 Identify the **angle** as right, straight, obtuse, or acute.

- A obtuse
- B right
- C acute
- D straight



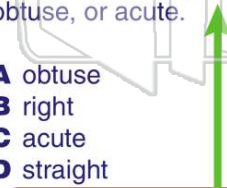
2 Identify the **angle** as right, straight, obtuse, or acute.

- A obtuse
- B right
- C acute
- D straight



3 Identify the **angle** as right, straight, obtuse, or acute.

- A obtuse
- B right
- C acute
- D straight



4 Identify the **angle** as right, straight, obtuse, or acute.

- A obtuse
- B right



5  
I  
o  
A  
E  
C  
D

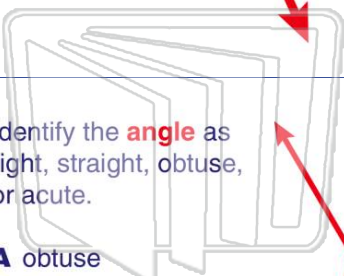


## PREVIEW

Please [Sign In](#) or [Sign Up](#) to download the printable version of this worksheet

7  
I  
o  
A  
E  
C  
D

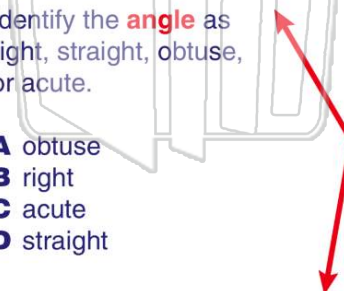
- A obtuse
- B right
- C acute
- D straight



- A obtuse
- B right
- C acute
- D straight

9 Identify the **angle** as right, straight, obtuse, or acute.

- A obtuse
- B right
- C acute
- D straight



10 Identify the **angle** as right, straight, obtuse, or acute.

- A obtuse
- B right
- C acute
- D straight






## ANSWER KEY

Identify the **angle** as right, straight, obtuse, or acute.

- A** obtuse
- B** right
- C** acute
- D** straight



(c)

Identify the **angle** as right, straight, obtuse, or acute.

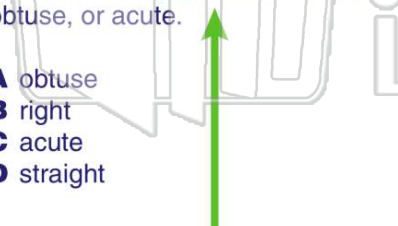
- A** obtuse
- B** right
- C** acute
- D** straight



(a)

Identify the **angle** as right, straight, obtuse, or acute.

- A** obtuse
- B** right
- C** acute
- D** straight



(b)

Identify the **angle** as right, straight, obtuse, or acute.

- A** obtuse
- B** right
- C** acute



(d)



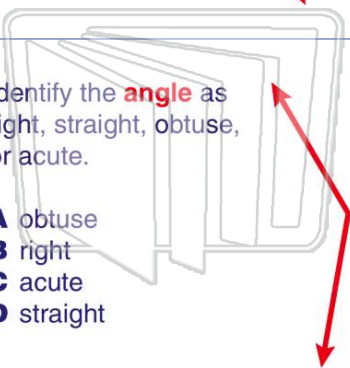
## PREVIEW

Please [Sign In](#) or [Sign Up](#) to download the printable version of this worksheet

- D** straight

Identify the **angle** as right, straight, obtuse, or acute.

- A** obtuse
- B** right
- C** acute
- D** straight

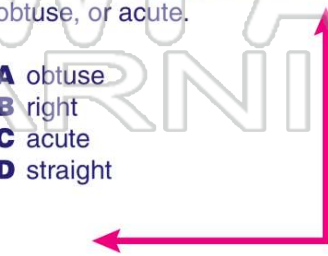


(a)

- C** acute
- D** straight

Identify the **angle** as right, straight, obtuse, or acute.

- A** obtuse
- B** right
- C** acute
- D** straight



(b)