

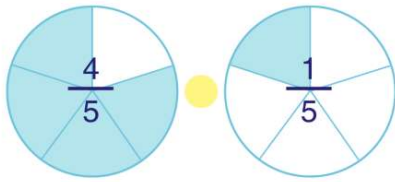


# Compare and Order Fractions

Math  
E

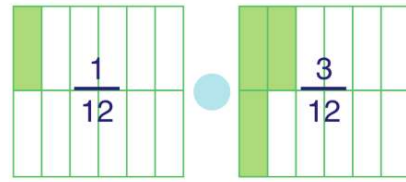
Name \_\_\_\_\_ Class \_\_\_\_\_ Date \_\_\_\_\_

1



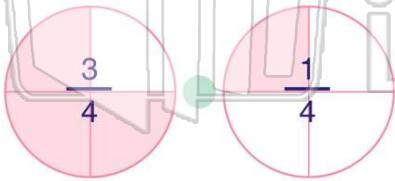
A <  
B >  
C =

2



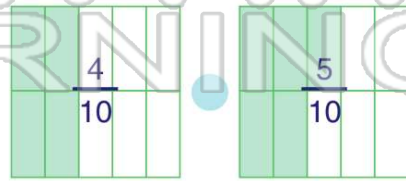
A <  
B >  
C =

3



A <

4



A <

5

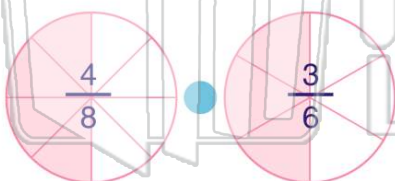


## PREVIEW

7

Please [Sign In](#) or [Sign Up](#) to download the printable version of this worksheet

9



A <  
B >  
C =

10

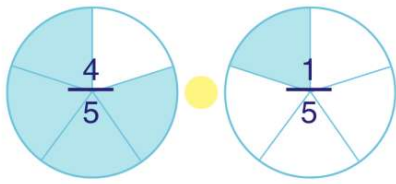


A <  
B >  
C =

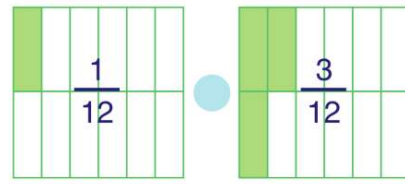




## ANSWER KEY

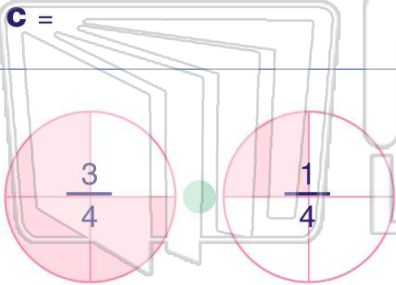


(b)



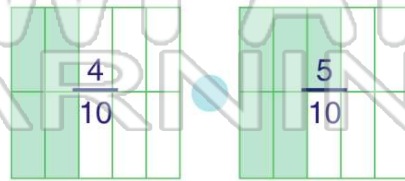
(a)

A <  
B >  
C =



(b)

A <  
B >  
C =



(a)

A <  
B >

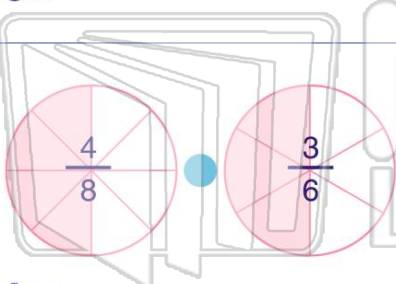
A <  
B >



## PREVIEW

Please [Sign In](#) or [Sign Up](#) to download the printable version of this worksheet

A <  
B >  
C =



(c)

A <  
B >  
C =

$$\frac{6}{15} \quad \frac{5}{6}$$

(a)

A <  
B >  
C =

A <  
B >  
C =

