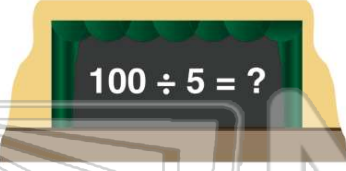




Name _____ Class _____ Date _____

1 There are **100 lines** in the school play for **5 students** to share equally. **How many lines should each student get?**

- A 12
- B 20
- C 13
- D 8



2 There are **22 students** in Mr. Place's class. He gave his class a bag of candy with **198 pieces**. How many pieces of candy will each student receive if Mr. Place shares the candy equally among the students?

- A 15
- B 13
- C 14
- D 9



3 Mrs. McDonald is organizing a trip to the museum for **125 students**, teachers, and parents. If each bus can seat **25 people**, how many buses does she need?

4 The bleachers in the gymnasium hold **35 students** each. There are **315 students** coming to the basketball game. How many bleachers will the students take up?

- A 9
- B 10



PREVIEW

Please [Sign In](#) or [Sign Up](#) to download the printable version of this worksheet

7 **120**, how many DVDs could Becky buy?

- A 5
- B 2
- C 6
- D 4



8 **28 ÷ 4 =**

- A 9
- B 7
- C 8
- D 6



9 Keith's family is going on vacation. They need to drive a total of **624 miles** in **two days**. How many miles will they need to drive each day?

- A 312
- B 311
- C 313
- D 314



10 Monica sold glasses of lemonade for \$4 each. The total amount of money Monica collected from her sales was \$480. How many glasses did she sell?

- A 12
- B 48
- C 120
- D 480






ANSWER KEY

There are **100 lines** in the school play for **5 students** to share equally. **How many lines should each student get?**

- A 12
- B 20
- C 13
- D 8



(b)

There are **22 students** in Mr. Place's class. He gave his class a bag of candy with **198 pieces**. How many pieces of candy will each student receive if Mr. Place shares the candy equally among the students?

- A 15
- B 13
- C 14
- D 9



(d)

Mrs. McDonald is organizing a trip to the museum for **125 students**, teachers, and parents. If each bus can seat **25 people**, how many buses does she need?


- A 4
- B 5
- C 5
- D 4



(c)

The bleachers in the gymnasium hold **35 students** each. There are **315 students** coming to the basketball game. How many bleachers will the students take up?

- A 9
- B 10
- C 14



(a)



PREVIEW

Please [Sign In](#) or [Sign Up](#) to download the printable version of this worksheet

- A 5
- B 2
- C 6
- D 4



- B 7
- C 8
- D 6



Keith's family is going on vacation. They need to drive a total of **624 miles** in **two days**. How many miles will they need to drive each day?

- A 312
- B 311
- C 313
- D 314



(a)

Monica sold glasses of lemonade for \$4 each. The total amount of money Monica collected from her sales was **\$480**. How many glasses did she sell?

- A 12
- B 48
- C 120
- D 480



(c)