




Name _____ Class _____ Date _____


1 Calculate the **elapsed time**.
 9:59 in the **morning** to
 2:59 in the **afternoon**

A 3 hours
 B 4 hours
 C 5 hours
 D 6 hours




2 Calculate the **elapsed time**.
 2 a.m. to 3 p.m.

A 1 hour
 B 12 hours
 C 2 hours
 D 13 hours




3 Calculate the **elapsed time**.
 8:45 in the **morning** to
 2:45 in the **afternoon**

A 2 hours
 B 6 hours
 C 10 hours
 D 12 hours



4 Calculate the **elapsed time**.
 10:35 in the **morning** to
 10:35 in the **evening**

A 12 hours
 B 1 hour
 C 24 hours
 D 25 hours



5



PREVIEW


Please [Sign In](#) or [Sign Up](#) to download
 the printable version of this worksheet

7

A 5 hours, 22 minutes
 B 4 hours, 22 minutes
 C 6 hours, 22 minutes
 D 3 hours, 22 minutes



B 20 minutes
 C 1 hour, 20 minutes
 D 30 minutes





9 Calculate the **elapsed time**.
 12:52 p.m. to 8:11 p.m.

A 7 hours, 20 minutes
 B 8 hours, 19 minutes
 C 8 hours, 20 minutes
 D 7 hours, 19 minutes




10 Calculate the **elapsed time**.
 1:01 a.m. to 4:29 a.m.

A 3 hours, 28 minutes
 B 4 hours, 28 minutes
 C 3 hours, 30 minutes
 D 4 hours, 30 minutes



ANSWER KEY

Calculate the **elapsed time**.

9:59 in the **morning** to
2:59 in the **afternoon**

- A 3 hours
- B 4 hours
- C 5 hours
- D 6 hours



(c)

Calculate the **elapsed time**.

2 a.m. to 3 p.m.

- A 1 hour
- B 12 hours
- C 2 hours
- D 13 hours



(d)

Calculate the **elapsed time**.

8:45 in the **morning** to
2:45 in the **afternoon**

- A 2 hours
- B 6 hours
- C 10 hours
- D 4 hours



(b)

Calculate the **elapsed time**.

10:35 in the **morning** to
10:35 in the **evening**

- A 12 hours
- B 1 hour
- C 24 hours
- D 6 hours



(a)



PREVIEW

Please [Sign In](#) or [Sign Up](#) to download the printable version of this worksheet

- A 4 hours, 22 minutes
- B 6 hours, 22 minutes
- C 3 hours, 22 minutes



- C 1 hour, 20 minutes
- D 30 minutes



Calculate the **elapsed time**.

12:52 p.m. to 8:11 p.m.

- A 7 hours, 20 minutes
- B 8 hours, 19 minutes
- C 8 hours, 20 minutes
- D 7 hours, 19 minutes



(d)



Calculate the **elapsed time**.

1:01 a.m. to 4:29 a.m.

- A 3 hours, 28 minutes
- B 4 hours, 28 minutes
- C 3 hours, 30 minutes
- D 4 hours, 30 minutes



(a)

