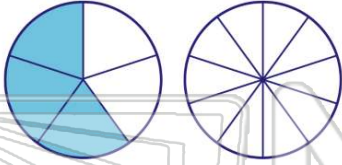




Name _____ Class _____ Date _____

1 Fill in the blank to complete the equivalent fraction: $\frac{3}{5} = \frac{?}{10}$

- A 4
- B 5
- C 6
- D 7



2 Fill in the blank to complete the equivalent fraction: $\frac{44}{55} = \frac{?}{5}$

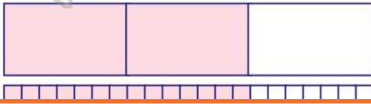
- A 1
- B 2
- C 3
- D 4

"Fractions are fun!"



3 Fill in the blank to complete the equivalent fraction: $\frac{2}{3} = \frac{14}{?}$

- A 20
- B 21
- C 19
- D 15



4 Fill in the blank to complete the equivalent fraction: $\frac{12}{?} = \frac{3}{10}$

- A 40
- B 14
- C 25
- D 30

"Fractions are fun!"



PREVIEW

Please [Sign In](#) or [Sign Up](#) to download the printable version of this worksheet

- B 2
- C 3
- D 4

- B 12
- C 18
- D 19

"Fractions are fun!"

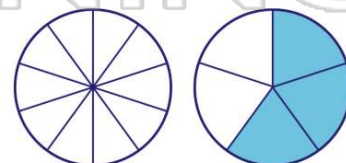


9 Fill in the blank to complete the equivalent fraction: $\frac{1}{2} = \frac{?}{72}$

- A 30
- B 32
- C 35
- D 36

10 Fill in the blank to complete the equivalent fraction: $\frac{?}{10} = \frac{3}{5}$

- A 4
- B 5
- C 6
- D 7



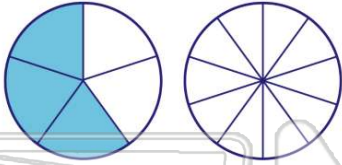


ANSWER KEY

Fill in the blank to complete the

equivalent fraction: $\frac{3}{5} = \frac{?}{10}$

- A** 4
- B** 5
- C** 6
- D** 7



(c)

Fill in the blank to complete the

equivalent fraction: $\frac{44}{55} = \frac{?}{5}$

- A** 1
- B** 2
- C** 3
- D** 4

"Fractions are fun!"

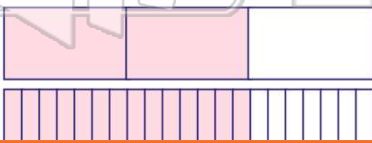


(d)

Fill in the blank to complete the

equivalent fraction: $\frac{2}{3} = \frac{14}{?}$

- A** 20
- B** 21
- C** 19
- D** 15



(b)

Fill in the blank to complete the

equivalent fraction: $\frac{12}{?} = \frac{3}{10}$

- A** 40
- B** 14
- C** 25
- D** 30

"Fractions are fun!"



(a)



PREVIEW

Please [Sign In](#) or [Sign Up](#) to download the printable version of this worksheet

- C** 3
- D** 4

- C** 18
- D** 19



Fill in the blank to complete the

equivalent fraction: $\frac{1}{2} = \frac{?}{72}$

- A** 30
- B** 32
- C** 35
- D** 36

(d)

Fill in the blank to complete the

equivalent fraction: $\frac{?}{10} = \frac{3}{5}$

- A** 4
- B** 5
- C** 6
- D** 7



(c)