



Name _____ Class _____ Date _____

1 What is the best **estimate** of $34 + 75 + 22$?
Nearest Ten

A 131
B 130
C 120
D 140

2 What is the best **estimate** of $12 + 54 + 31$?
Nearest Ten

A 120
B 100
C 90
D 110

3 What is the best **estimate** of $43 + 11 + 27$?
Nearest Ten

A 90
B 100
C 95
D 80

4 What is the best **estimate** of $23 + 67 + 89$?
Nearest Ten

A 200
B 90
C 100
D 180



PREVIEW

7 Please [Sign In](#) or [Sign Up](#) to download the printable version of this worksheet

B 20
C 33
D 9

B 25
C 20
D 15

9 What is the best **estimate** of $4.67 + 22.1 + 7.7$?
Nearest Whole Number

A 33
B 35
C 40
D 32

10 What is the best **estimate** of $90.9 + 3.1 + 7.5$?
Nearest Whole Number

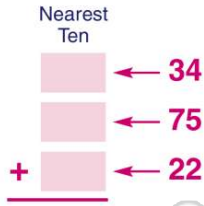
A 102
B 108
C 100
D 115



ANSWER KEY

What is the best **estimate** of $34 + 75 + 22$?

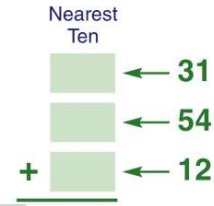
- A 131
- B 130
- C 120
- D 140



(b)

What is the best **estimate** of $12 + 54 + 31$?

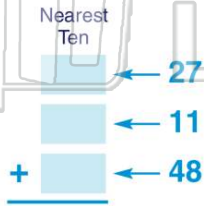
- A 120
- B 100
- C 90
- D 110



(c)

What is the best **estimate** of $48 + 11 + 27$?

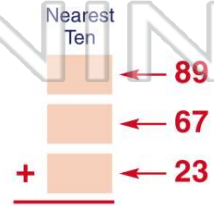
- A 90
- B 100
- C 95
- D 80



(a)

What is the best **estimate** of $23 + 67 + 89$?

- A 200
- B 90
- C 100
- D 180



(d)



PREVIEW

Please [Sign In](#) or [Sign Up](#) to download the printable version of this worksheet

- C 33
- D 9



(b)

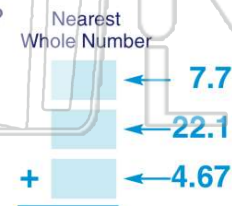
- C 20
- D 15



(a)

What is the best **estimate** of $4.67 + 22.1 + 7.7$?

- A 33
- B 35
- C 40
- D 32



What is the best **estimate** of $90.9 + 3.1 + 7.5$?

- A 102
- B 108
- C 100
- D 115

