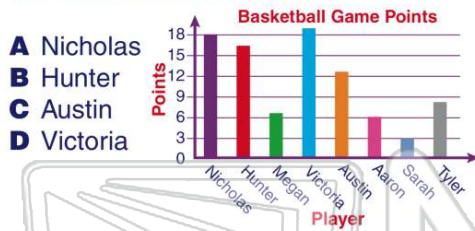


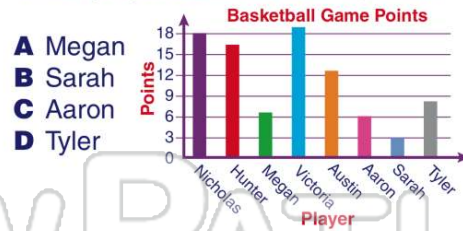


Name _____ Class _____ Date _____

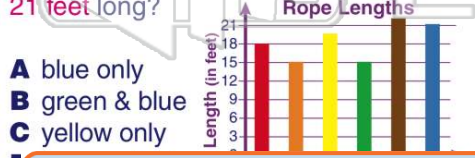
1 Use the graph to answer the question.
Who scored the **most** points?



2 Use the graph to answer the question.
Which player scored **below** 6 points?



3 Which piece or pieces of rope are **more than 18 feet** long but **less than 21 feet** long?



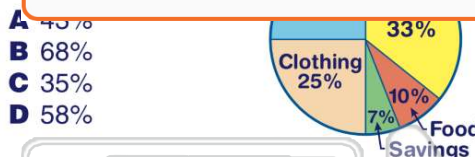
4 If it takes nine inches of rope to go around the fence post, how many times will the **red rope** go around the post?



5

PREVIEW

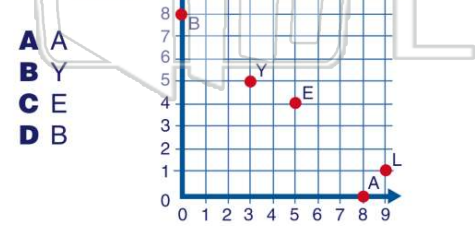
Please [Sign In](#) or [Sign Up](#) to download the printable version of this worksheet



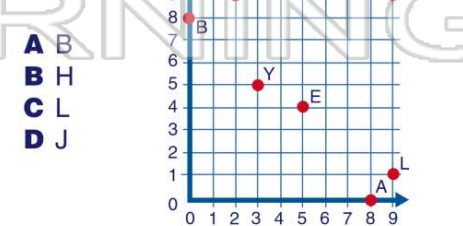
D 18

3	447
4	00158
5	35556
6	2

9 What letter represents the ordered pair **(8, 0)**?



10 What letter represents the ordered pair **(9, 1)**?





ANSWER KEY

Use the graph to answer the question.
Who scored the **most** points?

- A Nicholas
- B Hunter
- C Austin
- D Victoria



(d)

Use the graph to answer the question.
Which player scored **below** 6 points?

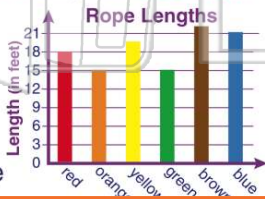
- A Megan
- B Sarah
- C Aaron
- D Tyler



(b)

Which piece or pieces of rope are **more than 18 feet** long but **less than 21 feet** long?

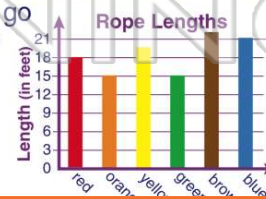
- A blue only
- B green & blue
- C yellow only
- D orange & blue



(c)

If it takes nine inches of rope to go around the fence post, how many times will the **red rope** go around the post?

- A 3
- B 2
- C 1.5



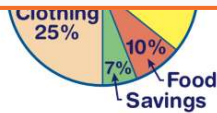
(b)



PREVIEW

Please [Sign In](#) or [Sign Up](#) to download the printable version of this worksheet

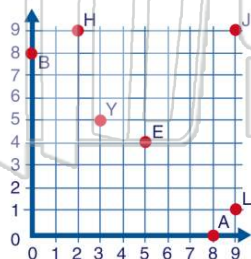
- C 35%
- D 58%



4	00158
5	35556
6	2

What letter represents the ordered pair **(8, 0)**?

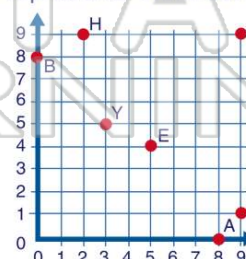
- A A
- B Y
- C E
- D B



(a)

What letter represents the ordered pair **(9, 1)**?

- A B
- B H
- C L
- D J



(c)