

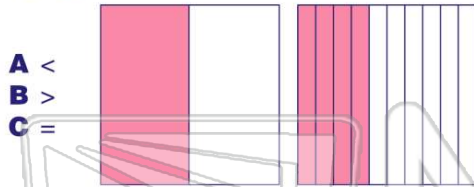


Less Than, Greater Than

Name _____ Class _____ Date _____

1 Compare using the symbols $<$, $>$, $=$.

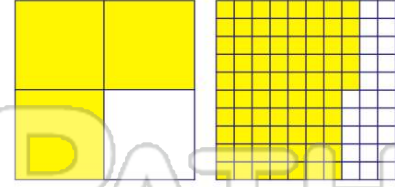
$\frac{1}{2}$ 0.50



A $<$
B $>$
C $=$

2 Compare using the symbols $<$, $>$, $=$.

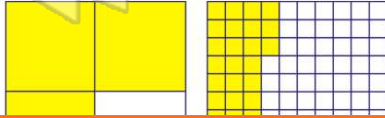
$\frac{3}{4}$ 0.75



A $<$
B $>$
C $=$

3 Compare using the symbols $<$, $>$, $=$.


$\frac{3}{4}$ 0.33



A $<$
B $>$
C $=$

4 Compare using the symbols $<$, $>$, $=$.

$\frac{1}{3}$ 0.66



A $<$
B $>$
C $=$

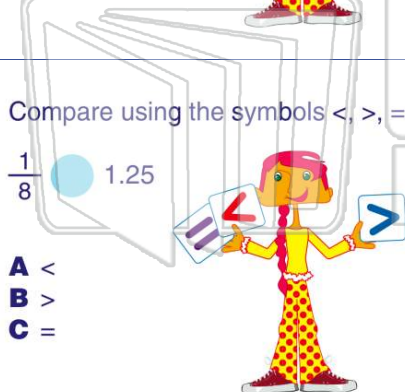


PREVIEW

Please [Sign In](#) or [Sign Up](#) to download the printable version of this worksheet

9 Compare using the symbols $<$, $>$, $=$.

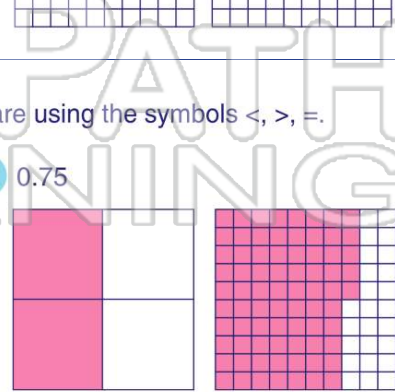
$\frac{1}{8}$ 1.25



A $<$
B $>$
C $=$

10 Compare using the symbols $<$, $>$, $=$.

$\frac{2}{4}$ 0.75



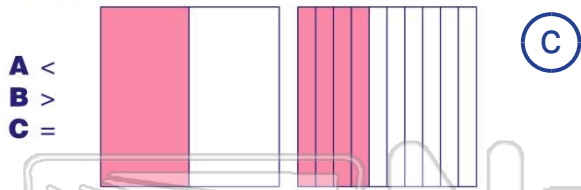
A $<$
B $>$
C $=$



ANSWER KEY

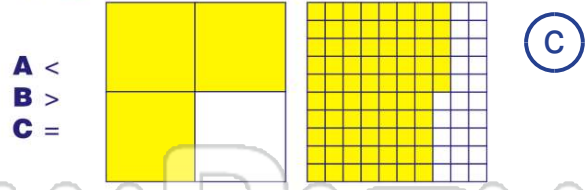
Compare using the symbols $<$, $>$, $=$.

$\frac{1}{2}$ ● 0.50



Compare using the symbols $<$, $>$, $=$.

$\frac{3}{4}$ ● 0.75



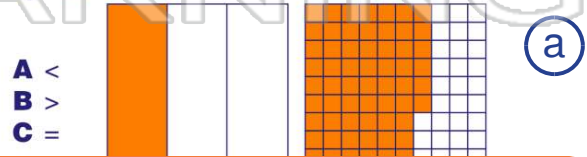
Compare using the symbols $<$, $>$, $=$.

$\frac{3}{4}$ ● 0.33



Compare using the symbols $<$, $>$, $=$.

$\frac{1}{3}$ ● 0.66



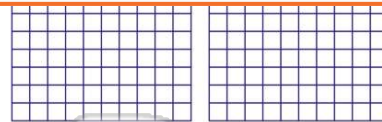
PREVIEW

Please [Sign In](#) or [Sign Up](#) to download the printable version of this worksheet

A
B $>$
C $=$



B $>$
C $=$



Compare using the symbols $<$, $>$, $=$.

$\frac{1}{8}$ ● 1.25



Compare using the symbols $<$, $>$, $=$.

$\frac{2}{4}$ ● 0.75

