



Name _____ Class _____ Date _____

1

Choose the answer that **best completes** the expression.

$$0.33 > \frac{?}{8}$$

- A 3
- B 2
- C 4
- D 5

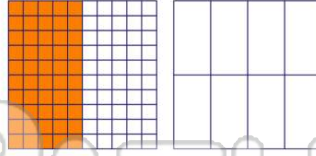


2

Choose the answer that **best completes** the expression.

$$0.50 < \frac{?}{8}$$

- A 2
- B 3
- C 1
- D 5

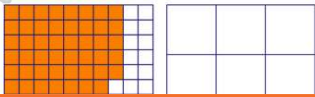


3

Choose the answer that **best completes** the expression.

$$0.75 < \frac{?}{9}$$

- A 8
- B 1
- C 9

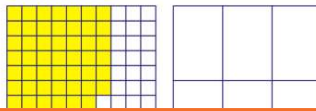


4

Choose the answer that **best completes** the expression.

$$0.66 > \frac{?}{6}$$

- A 6
- B 5
- C 9



5



PREVIEW

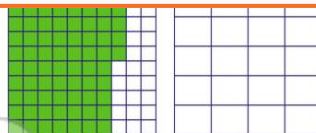
7

Please [Sign In](#) or [Sign Up](#) to download the printable version of this worksheet

- A 4
- B 3
- C 2
- D 1



- A 5
- B 10
- C 15
- D 1

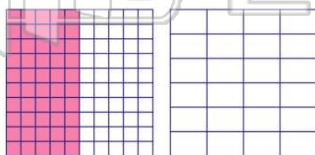


9

Choose the answer that **best completes** the expression.

$$0.50 = \frac{?}{24}$$

- A 2
- B 12
- C 10
- D 4

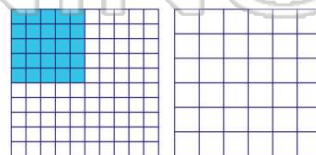


10

Choose the answer that **best completes** the expression.

$$0.25 = \frac{?}{36}$$

- A 9
- B 8
- C 7
- D 6



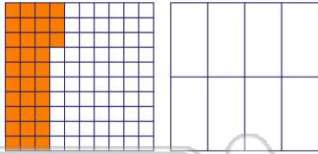


ANSWER KEY

Choose the answer that **best completes** the expression.

$$0.33 > \frac{?}{8}$$

- A** 3
- B** 2
- C** 4
- D** 5

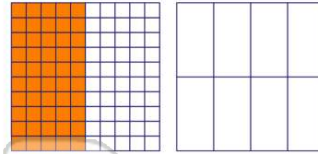


(b)

Choose the answer that **best completes** the expression.

$$0.50 < \frac{?}{8}$$

- A** 2
- B** 3
- C** 1
- D** 5

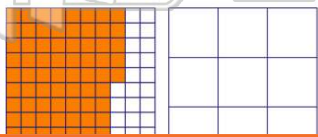


(d)

Choose the answer that **best completes** the expression.

$$0.75 < \frac{?}{9}$$

- A** 8
- B** 1
- C** 2
- D** 4

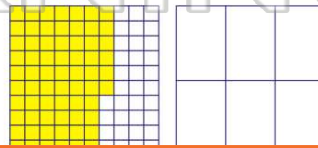


(a)

Choose the answer that **best completes** the expression.

$$0.66 > \frac{?}{6}$$

- A** 6
- B** 5
- C** 2
- D** 4



(c)



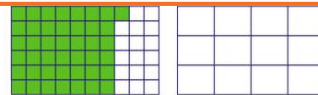
PREVIEW

Please [Sign In](#) or [Sign Up](#) to download the printable version of this worksheet

- B** 3
- C** 2
- D** 1



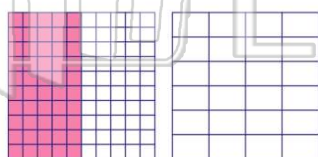
- B** 10
- C** 15
- D** 1



Choose the answer that **best completes** the expression.

$$0.50 = \frac{?}{24}$$

- A** 2
- B** 12
- C** 10
- D** 4

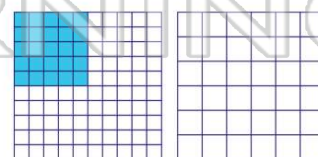


(b)

Choose the answer that **best completes** the expression.

$$0.25 = \frac{?}{36}$$

- A** 9
- B** 8
- C** 7
- D** 6



(a)