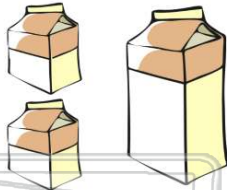




Name _____ Class _____ Date _____

1 If there are 2 pints in a quart, how many quarts is 86 pints?

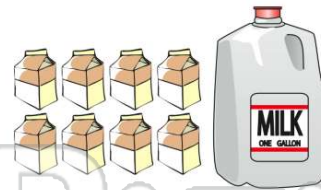
- A 86
- B 43
- C 172
- D 22



2 pints = 1 quart

2 If there are 8 pints in one gallon, how many pints are there in 7 gallons?

- A 56
- B 15
- C 28
- D 1



8 pints = 1 gallon

3 What letter indicates $\frac{3}{4}$ inch?

- A J
- B K
- C L
- D M



4 What letter indicates $5\frac{1}{8}$ inches?

- A X
- B Y
- C W
- D Z



PREVIEW

7 Please [Sign In](#) or [Sign Up](#) to download the printable version of this worksheet

- B B
- C C
- D D



ABC D

- B K
- C L
- D M



J K L M

9 What letter indicates $1\frac{5}{8}$ inches?

- A A
- B B
- C C
- D D



A BCD

10 What letter indicates $5\frac{2}{8}$ inches?

- A A
- B B
- C C
- D D



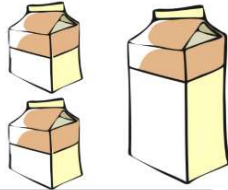
ABCD



ANSWER KEY

If there are 2 pints in a quart, how many quarts is 86 pints?

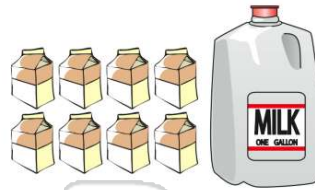
- A 86
- B 43
- C 172
- D 22



(b)

If there are 8 pints in one gallon, how many pints are there in 7 gallons?

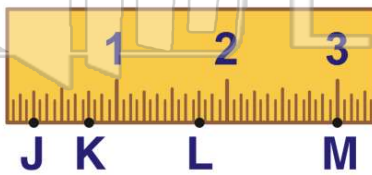
- A 56
- B 15
- C 28
- D 1



(a)

What letter indicates $\frac{3}{4}$ inch?

- A J
- B K
- C L
- D M



(b)

What letter indicates $5\frac{1}{8}$ inches?

- A X
- B Y
- C W
- D Z



(a)



PREVIEW

Please [Sign In](#) or [Sign Up](#) to download the printable version of this worksheet

- C C
- D D



(d)

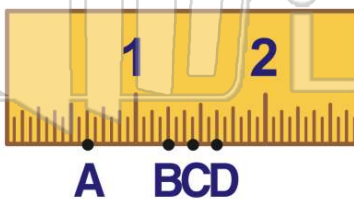
- C L
- D M



(c)

What letter indicates $1\frac{5}{8}$ inches?

- A A
- B B
- C C
- D D



What letter indicates $5\frac{2}{8}$ inches?

- A A
- B B
- C C
- D D

