



Name _____ Class _____ Date _____

1 Find the answer in **simplest form**.

$$\begin{array}{r} 2 \text{ gal } 3 \text{ qt} \\ + 4 \text{ gal } 3 \text{ qt} \\ \hline \end{array}$$

- A 6 gal 6 qt
- B 7 gal 2 qt
- C 6 gal 2 qt
- D 7 gal 6 qt



2 Find the answer in **simplest form**.

$$\begin{array}{r} 6 \text{ pt } 1 \text{ c} \\ - 4 \text{ pt } 3 \text{ c} \\ \hline \end{array}$$

- A 2 pt 2 c
- B 2 pt
- C 1 pt
- D 1 pt 4 c



3 Find the answer in **simplest form**.

$$\begin{array}{r} 3 \text{ c } 6 \text{ fl oz} \\ + 2 \text{ c } 6 \text{ fl oz} \\ \hline \end{array}$$

- A 5 c 12 fl oz
- B 5 c 6 fl oz



4 There are 2 tablespoons in 1 fluid ounce. How many ounces are there in 14 tablespoons?

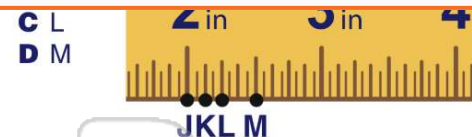

- A 7 fl oz
- B 8 fl oz
- C 9 fl oz



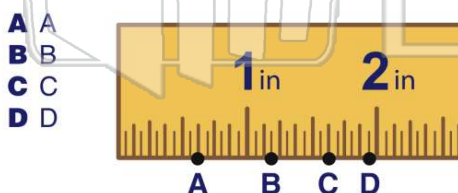
PREVIEW

Please [Sign In](#) or [Sign Up](#) to download the printable version of this worksheet

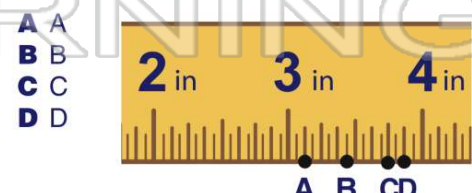
7



9 What letter indicates $1 \frac{5}{8}$ inch?



10 What letter indicates $3 \frac{7}{8}$ inch?



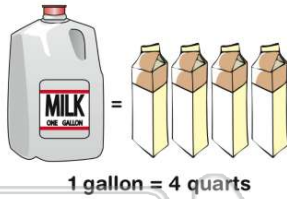


ANSWER KEY

Find the answer in **simplest form**.

$$\begin{array}{r} 2 \text{ gal } 3 \text{ qt} \\ + 4 \text{ gal } 3 \text{ qt} \\ \hline \end{array}$$

- A 6 gal 6 qt
- B 7 gal 2 qt
- C 6 gal 2 qt
- D 7 gal 6 qt



(b)

Find the answer in **simplest form**.

$$\begin{array}{r} 6 \text{ pt } 1 \text{ c} \\ - 4 \text{ pt } 3 \text{ c} \\ \hline \end{array}$$

- A 2 pt 2 c
- B 2 pt
- C 1 pt
- D 1 pt 4 c



(c)

Find the answer in **simplest form**.

$$\begin{array}{r} 3 \text{ c } 6 \text{ fl oz} \\ + 2 \text{ c } 6 \text{ fl oz} \\ \hline \end{array}$$

- A 5 c 12 fl oz
- B 5 c 6 fl oz
- C 6 c 12 fl oz



1 cup = 8 fl oz

(d)

There are 2 tablespoons in 1 fluid ounce. How many ounces are there in 14 tablespoons?

- A 7 fl oz
- B 8 fl oz
- C 9 fl oz
- D 10 fl oz



(a)



PREVIEW

Please [Sign In](#) or [Sign Up](#) to download the printable version of this worksheet



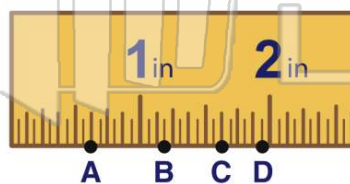
A B C D



J K L M

What letter indicates $1 \frac{5}{8}$ inch?

- A A
- B B
- C C
- D D



A B C D

(c)

What letter indicates $3 \frac{7}{8}$ inch?

- A A
- B B
- C C
- D D



A B C D

(d)