



Name \_\_\_\_\_ Class \_\_\_\_\_ Date \_\_\_\_\_

- 1 This water bottle holds 800 milliliters.  
How many liters are there in 800 milliliters?

$$1 \text{ L} = 1,000 \text{ mL}$$

- A 0.08 L
- B 0.8 L
- C 8 L
- D 80 L



- 2 How many milliliters are there in 5.4 liters?

$$1 \text{ L} = 1,000 \text{ mL}$$

- A 54 mL
- B 540 mL
- C 5,400 mL
- D 54,000 mL

- 3 Metric and customary units can both be used to measure capacity.

- A true
- B false



- 4 How many liters are there in 2,600 milliliters?

$$1 \text{ L} = 1,000 \text{ mL}$$

- A 0.026 L
- B 0.26 L



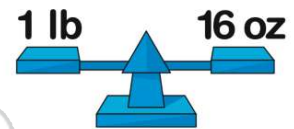
## PREVIEW

Please [Sign In](#) or [Sign Up](#) to download the printable version of this worksheet

- 7
- A 2 tons
  - B 2.5 tons
  - C 3 tons
  - D 3.5 tons



- A 2 lb 13 oz
- B 3 lb 3 oz
- C 13 lb 27 oz
- D 14 lb 11 oz



- 9 Heather's mom bought 11 pounds of apples to make a bunch of pies. How many ounces do the apples weigh?

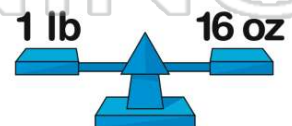
$$1 \text{ lb} = 16 \text{ oz}$$

- A 116 oz
- B 150 oz
- C 160 oz
- D 176 oz



- 10 There are 16 ounces in a pound. How many ounces are there in 5 pounds?

- A 80 oz
- B 160 oz
- C 32 oz
- D 64 oz





## ANSWER KEY

This water bottle holds 800 milliliters.  
How many liters are there in 800 milliliters?

$1 \text{ L} = 1,000 \text{ mL}$

- A 0.08 L
- B 0.8 L
- C 8 L
- D 80 L



(b)

How many milliliters are there in 5.4 liters?

$1 \text{ L} = 1,000 \text{ mL}$

- A 54 mL
- B 540 mL
- C 5,400 mL
- D 54,000 mL

(c)

Metric and customary units can both be used to measure capacity.

- A true
- B false



(a)

How many liters are there in 2,600 milliliters?

$1 \text{ L} = 1,000 \text{ mL}$

- A 0.026 L
- B 0.26 L
- C 2.6 L

(c)



## PREVIEW

Please [Sign In](#) or [Sign Up](#) to download the printable version of this worksheet

- A 2 tons
- B 2.5 tons
- C 3 tons
- D 3.5 tons



- A 2 lb 13 oz
- B 3 lb 3 oz
- C 13 lb 27 oz
- D 14 lb 11 oz



Heather's mom bought 11 pounds of apples to make a bunch of pies. How many ounces do the apples weigh?

$1 \text{ lb} = 16 \text{ oz}$

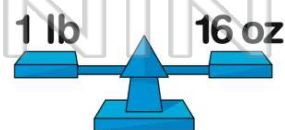
- A 116 oz
- B 150 oz
- C 160 oz
- D 176 oz



(d)

There are 16 ounces in a pound. How many ounces are there in 5 pounds?

- A 80 oz
- B 160 oz
- C 32 oz
- D 64 oz



(a)