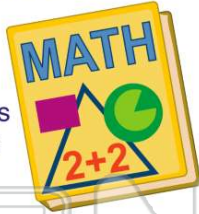




Name _____ Class _____ Date _____

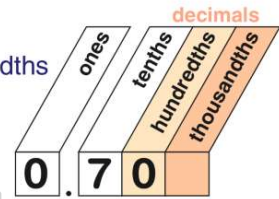
1 The decimal **0.31** is read as _____.

- A thirty-one
- B thirty-one thousandths
- C thirty-one hundredths
- D thirty-one tenths



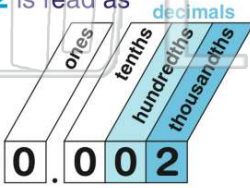
2 The decimal **0.7** is read as _____.

- A seven tenths
- B seven hundredths
- C seven thousandths
- D seven



3 The decimal **0.002** is read as _____.

- A two tenths
- B two hundredths
- C two
- D two thousandths



4 The decimal **9.075** is read as _____.

- A nine and seventy-five tenths
- B nine and seventy-five thousandths
- C nine and seventy-five hundredths
- D nine and seventy-five



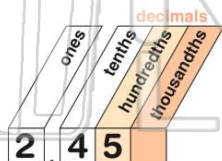
PREVIEW

Please [Sign In](#) or [Sign Up](#) to download the printable version of this worksheet

thousandths

9 The decimal **2.45** is read as _____.

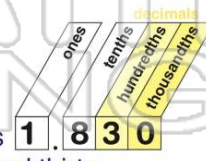
- B six and one hundred fifty tenths
- C six and one hundred fifty
- D six and one hundred fifty hundredths



- A two and forty-five tenths
- B two and forty-five thousandths
- C two and forty-five
- D two and forty-five hundredths

10 The decimal **1.830** is read as _____.

- B nine hundred ninety-nine tenths
- C nine hundred ninety-nine thousandths
- D nine hundred ninety-nine




- A one and eight hundred thirty tenths
- B one and eight hundred thirty thousandths
- C one and eight hundred thirty
- D one and eight hundred thirty hundredths



ANSWER KEY

The decimal **0.31** is read as _____.

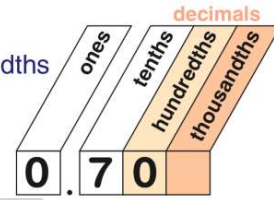
- A thirty-one
- B thirty-one thousandths
- C thirty-one hundredths
- D thirty-one tenths



(C)

The decimal **0.7** is read as _____.

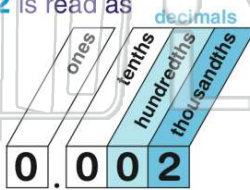
- A seven tenths
- B seven hundredths
- C seven thousandths
- D seven



(a)

The decimal **0.002** is read as _____.

- A two tenths
- B two hundredths
- C two
- D two thousandths



(d)

The decimal **9.075** is read as _____.

- A nine and seventy-five tenths
- B nine and seventy-five thousandths
- C nine and seventy-five hundredths
- D nine and seventy-five

(b)



PREVIEW

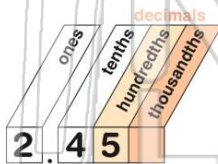
Please [Sign In](#) or [Sign Up](#) to download the printable version of this worksheet

- C six and one hundred fifty
- D six and one hundred fifty hundredths

- C nine hundred ninety-nine thousandths
- D nine hundred ninety-nine

The decimal **2.45** is read as _____.

- A two and forty-five tenths
- B two and forty-five thousandths
- C two and forty-five
- D two and forty-five hundredths



(d)

The decimal **1.830** is read as _____.

- A one and eight hundred thirty tenths
- B one and eight hundred thirty thousandths
- C one and eight hundred thirty
- D one and eight hundred thirty hundredths



(b)