

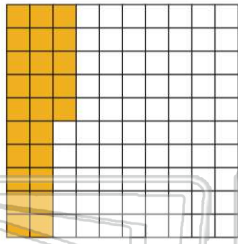


Name _____ Class _____ Date _____

1 Write the percent as a **decimal**.

25%

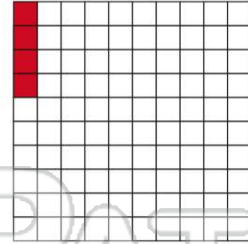
- A .25
- B .2
- C 2.5
- D 25.00



2 Write the percent as a **decimal**.

4%

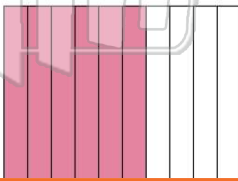
- A 0.4
- B 0.04
- C 4.0
- D 40.0



3 Write the percent as a **decimal**.

60%

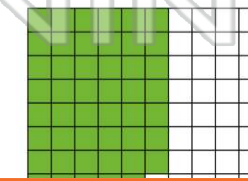
- A 60.0
- B 0.06
- C 0.006



4 Write the percent as a **decimal**.

57%

- A 57.0
- B 0.57
- C 0.057



5



PREVIEW

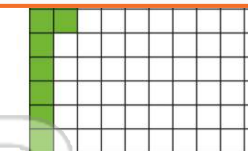
7

Please [Sign In](#) or [Sign Up](#) to download the printable version of this worksheet

- C 0.99
- D 0.099

99%

- A 0.15
- B 0.15
- C 1.5
- D 15.0



9

Write the percent as a **decimal**.

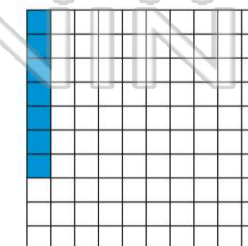
- A 2.0
- B 0.20
- C 0.020
- D 20.0



10 Write the percent as a **decimal**.

7%

- A 0.07
- B 0.007
- C 7.0
- D 70.0

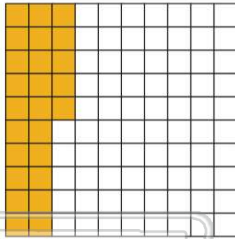




ANSWER KEY

Write the percent as a **decimal**.

25%

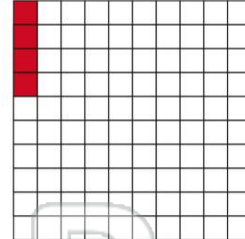


- A** .25
- B** .2
- C** 2.5
- D** 25.00

(a)

Write the percent as a **decimal**.

4%

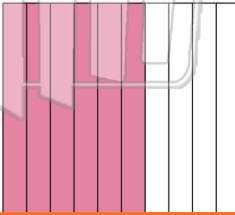


- A** 0.4
- B** 0.04
- C** 4.0
- D** 40.0

(b)

Write the percent as a **decimal**.

60%

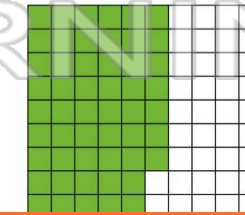


- A** 60.0
- B** 0.06
- C** 0.006
- D** 0.60

(d)

Write the percent as a **decimal**.

57%



- A** 57.0
- B** 0.57
- C** 0.057
- D** 5.70

(b)



PREVIEW

Please [Sign In](#) or [Sign Up](#) to download the printable version of this worksheet

Write the percent as a **decimal**.


- A** 2.0
- B** 0.20
- C** 0.020
- D** 20.0



(b)

Write the percent as a **decimal**.

7%



- A** 0.07
- B** 0.007
- C** 7.0
- D** 70.0

(a)