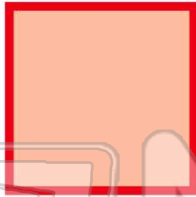




Name \_\_\_\_\_ Class \_\_\_\_\_ Date \_\_\_\_\_

1 If the **length of one side** of a **square** is **44 yards**, what are the **lengths of each** of the other sides?

- A 34 yd.
- B 11 yd.
- C 44 yd.
- D 4 yd.



2 The **perimeter** of a **rectangle** whose **length is 17 m** and **width is 4 m** is \_\_\_\_\_.

- A 42 m
- B 21 m
- C 4.2 m
- D 68 m



3 The **perimeter** of a **rectangle** whose **length is 9.65 in.** and **width is 3.09 in.** is \_\_\_\_\_.

- A 12.74 in.
- B 29.85 in.
- C 254.8 in.
- D



4 The **perimeter** of a regular **octagon** whose **sides are all 19.54 units long** is \_\_\_\_\_.

- A 27.54 units
- B 156.32 units
- C 15.632 units
- D

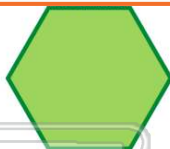


## PREVIEW

Please [Sign In](#) or [Sign Up](#) to download the printable version of this worksheet

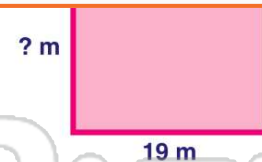
7 The **perimeter** of a **regular hexagon** is **108 feet**. How long is **each side**?

- A 108 feet
- B 54 feet
- C 135 feet
- D 81 feet



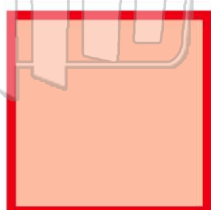
8 The **perimeter** of a **square** is **76 m**. How long is **each side**?

- A 19 m
- B 51 m
- C 25.5 m
- D 35 m



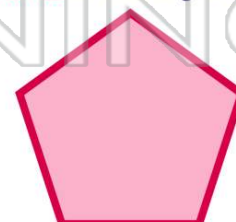
9 The **perimeter** of a **square** is **20 feet**. How long is **each side**?

- A 2 feet
- B 3 feet
- C 4 feet
- D 5 feet



10 The **perimeter** of a regular **pentagon** is **100 centimeters**. How long is **each side**?

- A 10 cm
- B 20 cm
- C 25 cm
- D 50 cm






## ANSWER KEY

If the **length of one side** of a **square** is **44 yards**, what are the **lengths of each** of the other sides?

- A 34 yd.
- B 11 yd.
- C 44 yd.
- D 4 yd.



(C)

The **perimeter** of a **rectangle** whose **length is 17 m** and **width is 4 m** is \_\_\_\_\_.

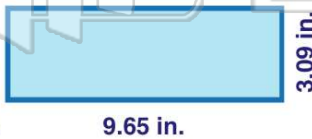
- A 42 m
- B 21 m
- C 4.2 m
- D 68 m



(a)

The **perimeter** of a **rectangle** whose **length is 9.65 in.** and **width is 3.09 in.** is \_\_\_\_\_.

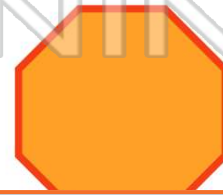
- A 12.74 in.
- B 29.85 in.
- C 254.8 in.
- D 25.48 in.



(d)

The **perimeter** of a regular **octagon** whose **sides are all 19.54 units long** is \_\_\_\_\_.

- A 27.54 units
- B 156.32 units
- C 15.632 units
- D 117.24 units



(b)



## PREVIEW

Please [Sign In](#) or [Sign Up](#) to download the printable version of this worksheet

- C 135 feet
- D 81 feet

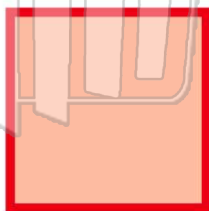


- C 25.5 m
- D 35 m



The **perimeter** of a **square** is **20 feet**. How long is **each side**?


- A 2 feet
- B 3 feet
- C 4 feet
- D 5 feet



(d)

The **perimeter** of a regular **pentagon** is **100 centimeters**. How long is **each side**?

- A 10 cm
- B 20 cm
- C 25 cm
- D 50 cm



(b)