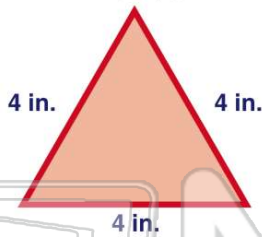




Name _____ Class _____ Date _____

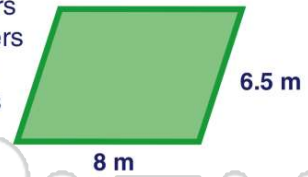
1 Find the **perimeter** of this polygon.

- A 4 inches
- B 12 inches
- C 32 inches
- D 64 inches

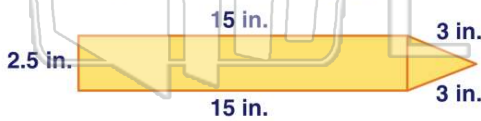


2 What is the **perimeter** of this polygon?

- A 14.5 meters
- B 2704 meters
- C 29 meters
- D 1.5 meters



3 Find the **perimeter** of the polygon.



- A 21 inches
- B 38.5 inches

4 Find the **perimeter** of the polygon.

- A 1.2 millimeters
- B 12 millimeters
- C 20 millimeters
- D 0.12 millimeters



5



PREVIEW

Please [Sign In](#) or [Sign Up](#) to download the printable version of this worksheet

7



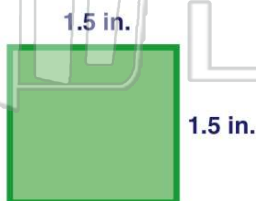
- A 42 mm
- B 422 mm
- C 2.42 mm
- D 0.422 mm



- C 15 cm
- D 2,500 cm

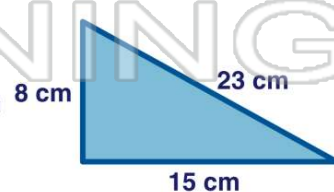
9 Find the **perimeter** of the polygon.

- A 3 inches
- B 4 inches
- C 6 inches
- D 5.06 inches



10 Find the **perimeter** of the polygon.

- A 46 cm
- B 327 cm
- C 5,040 cm
- D 43 cm

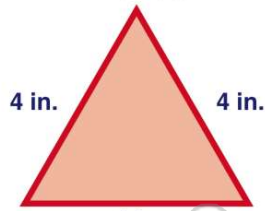




ANSWER KEY

Find the **perimeter** of this polygon.

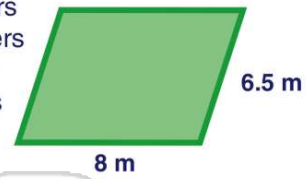
- A 4 inches
- B 12 inches
- C 32 inches
- D 64 inches



(b)

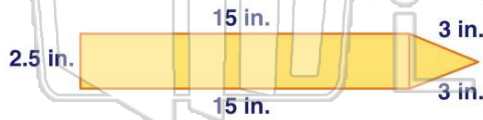
What is the **perimeter** of this polygon?

- A 14.5 meters
- B 2704 meters
- C 29 meters
- D 1.5 meters



(c)

Find the **perimeter** of the polygon.



(b)

- A 21 inches
- B 38.5 inches
- C 33 inches

Find the **perimeter** of the polygon.

- A 1.2 millimeters
- B 12 millimeters
- C 20 millimeters
- D 0.12 millimeters



(c)

F
A
E
C
D

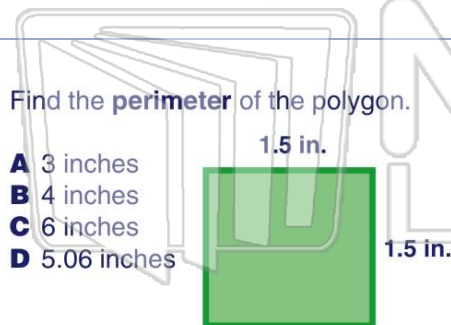


PREVIEW

Please [Sign In](#) or [Sign Up](#) to download the printable version of this worksheet

12 mm

- A 42 mm
- B 422 mm
- C 2.42 mm
- D 0.422 mm



(c)

Find the **perimeter** of the polygon.

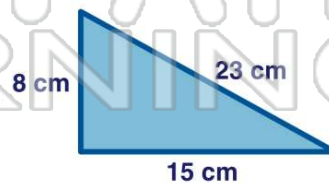
- A 3 inches
- B 4 inches
- C 6 inches
- D 5.06 inches

D 2,500 cm

10 cm

Find the **perimeter** of the polygon.

- A 46 cm
- B 327 cm
- C 5,040 cm
- D 43 cm



(a)