




Name _____ Class _____ Date _____

1 If the length of **one side** of a square is **4 yards**, what is the **perimeter**?

- A 0.4 yards
- B 16 yards
- C 44 yards
- D 4 yards



2 If a rectangle's **length is 19 m** and its **width is 3 m**, the **perimeter** is _____.



- A 44 meters
- B 21 meters
- C 4.2 meters
- D 68 meters

3 If a rectangle whose **length is 4 inches** and **width is 11 inches**, the **perimeter** is _____.

- A 15 in.
- B 20 in.
- C 24 in.



4 For a regular **octagon** whose sides are all **7.2 units** long, the **perimeter** of the octagon is _____.

- A 27.54 units
- B 57.6 units
- C 15.632 units



5

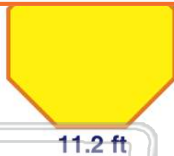


PREVIEW

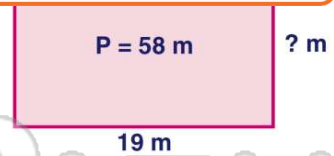
Please [Sign In](#) or [Sign Up](#) to download the printable version of this worksheet

7

- A 108 feet
- B 54.76 feet
- C 13.5 feet
- D 89.6 feet



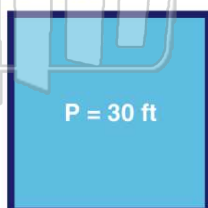
- A 10 meters
- B 12 meters
- C 85 meters
- D 14 meters



9

The perimeter of a **square** is **30 feet**. How long is **each side**?

- A 2 feet
- B 5.4 feet
- C 6 feet
- D 7.5 feet



10 The perimeter of a regular **pentagon** is **125 centimeters**. How long is **each side**?

- A 10 centimeters
- B 20 centimeters
- C 25 centimeters
- D 50 centimeters





ANSWER KEY

If the length of one side of a square is 4 yards, what is the perimeter?

- A 0.4 yards
- B 16 yards
- C 44 yards
- D 4 yards



(b)

If a rectangle's length is 19 m and its width is 3 m, the perimeter is _____.

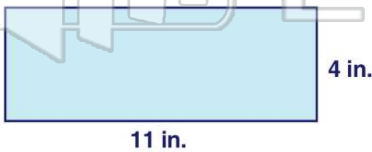


(a)

- A 44 meters
- B 21 meters
- C 4.2 meters
- D 68 meters

If a rectangle whose length is 4 inches and width is 11 inches, the perimeter is _____.

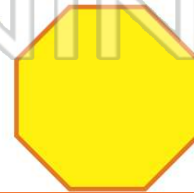
- A 15 in.
- B 20 in.
- C 24 in.
- D 30 in.



(d)

For a regular octagon whose sides are all 7.2 units long, the perimeter of the octagon is _____.

- A 27.54 units
- B 57.6 units
- C 15.632 units
- D 17.24 units



(b)



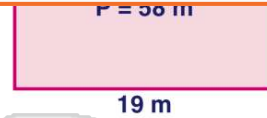
PREVIEW

Please [Sign In](#) or [Sign Up](#) to download the printable version of this worksheet

- A 54.76 feet
- B 13.5 feet
- C 89.6 feet
- D 11.2 ft

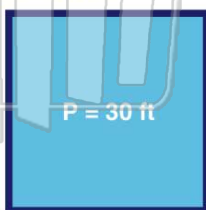


- A 85 meters
- B 14 meters
- C 19 m
- D 56 m



The perimeter of a square is 30 feet. How long is each side?

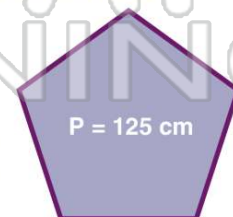
- A 2 feet
- B 5.4 feet
- C 6 feet
- D 7.5 feet



(d)

The perimeter of a regular pentagon is 125 centimeters. How long is each side?

- A 10 centimeters
- B 20 centimeters
- C 25 centimeters
- D 50 centimeters



(c)