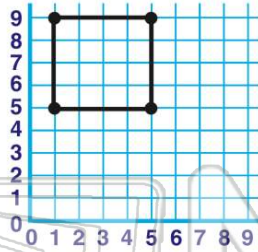




Name _____ Class _____ Date _____

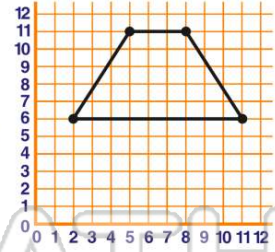
1 Name the **coordinate points** of the shape.

- A (1,5); (1,9); (5,5); (5,9)
- B (9,5); (5,5); (9,1); (5,1)
- C (5,9); (5,1); (5,5); (1,9)
- D (1,9); (5,1); (5,5); (9,5)



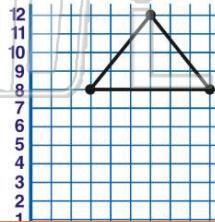
2 Name the **coordinate points** of the shape.

- A (11,5); (2,6); (8,11); (11,6)
- B (6,2); (11,5); (11,8); (6,11)
- C (11,8); (11,5); (11,6); (6,2)
- D (2,6); (5,11); (8,11); (11,6)



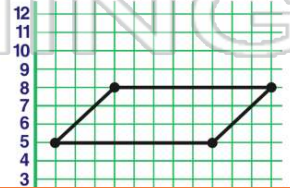
3 Name the **coordinate points** of the shape.

- A (3,8); (6,12); (9,8)
- B (8,3); (12,6); (8,9)
- C (9,8); (12,6); (8,3)
- D (8,9); (12,6); (8,3)



4 Name the **coordinate points** of the shape.

- A (12,8); (8,4); (5,1); (9,5)
- B (1,5); (4,8); (12,8); (9,5)
- C (5,1); (8,4); (8,12); (5,9)



5

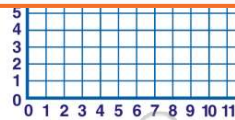


PREVIEW

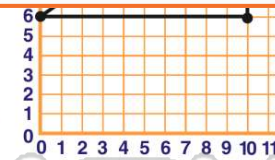
7

Please [Sign In](#) or [Sign Up](#) to download the printable version of this worksheet

- B (6,7); (9,11); (11,9); (11,5); (9,3)
- C (11,9); (5,13); (3,9); (9,13); (6,7)
- D (3,9); (5,13); (9,13); (11,9); (7,6)

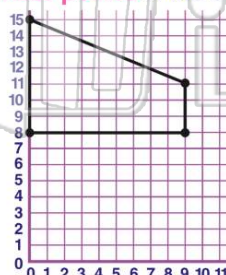


- (9,4); (6,10)
- C (6,0); (9,4); (9,10); (6,10)
- D (6,10); (9,10); (9,4); (6,0)



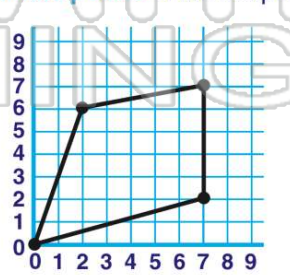
9 Name the **coordinate points** of the shape.

- A (8,0); (15,0); (11,9); (8,9)
- B (0,8); (15,0); (11,9); (8,9)
- C (0,8); (0,15); (9,11); (9,8)
- D (0,15); (9,8); (11,9); (8,0)



10 Name the **coordinate points** of the shape.

- A (0,0); (2,6); (7,7); (7,2)
- B (2,6); (7,7); (0,0); (2,7)
- C (2,7); (0,0); (7,7); (2,6)
- D (0,0); (6,2); (7,7); (2,7)

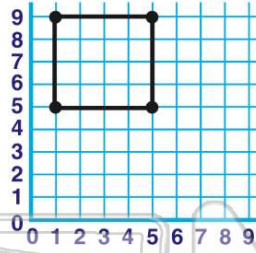




ANSWER KEY

Name the **coordinate points** of the shape.

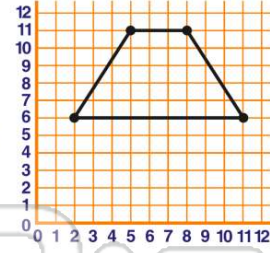
- A** (1,5); (1,9); (5,5); (5,9)
- B** (9,5); (5,5); (9,1); (5,1)
- C** (5,9); (5,1); (5,5); (1,9)
- D** (1,9); (5,1); (5,5); (9,5)



(a)

Name the **coordinate points** of the shape.

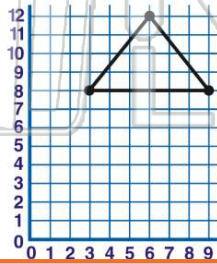
- A** (11,5); (2,6); (8,11); (11,6)
- B** (6,2); (11,5); (11,8); (6,11)
- C** (11,8); (11,5); (11,6); (6,2)
- D** (2,6); (5,11); (8,11); (11,6)



(d)

Name the **coordinate points** of the shape.

- A** (3,8); (6,12); (9,8)
- B** (8,3); (12,6); (8,9)
- C** (9,8); (12,6); (8,3)
- D** (8,9); (12,6); (8,3)



(a)

Name the **coordinate points** of the shape.

- A** (12,8); (8,4); (5,1); (9,5)
- B** (1,5); (4,8); (12,8); (9,5)
- C** (5,1); (8,4); (8,12); (5,9)
- D** (5,9); (8,12); (1,5); (4,8)



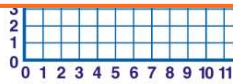
(b)



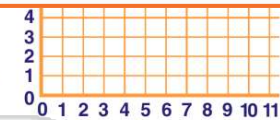
PREVIEW

Please [Sign In](#) or [Sign Up](#) to download the printable version of this worksheet

- C** (11,9); (11,5); (9,3); (11,9); (5,13); (3,9); (9,13); (6,7)
- D** (3,9); (5,13); (9,13); (11,9); (7,6)

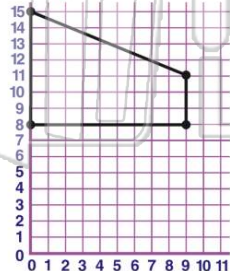


- C** (6,0); (9,4); (9,10); (6,10)
- D** (6,10); (9,10); (9,4); (6,0)



Name the **coordinate points** of the shape.

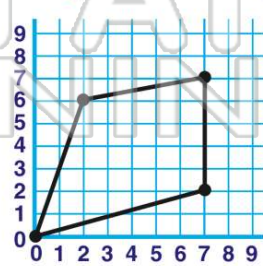
- A** (8,0); (15,0); (11,9); (8,9)
- B** (0,8); (15,0); (11,9); (8,9)
- C** (0,8); (0,15); (9,11); (9,8)
- D** (0,15); (9,8); (11,9); (8,0)



(c)

Name the **coordinate points** of the shape.

- A** (0,0); (2,6); (7,7); (7,2)
- B** (2,6); (7,7); (0,0); (2,7)
- C** (2,7); (0,0); (7,7); (2,6)
- D** (0,0); (6,2); (7,7); (2,7)



(a)