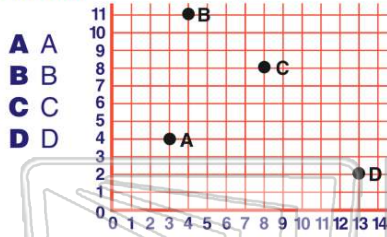


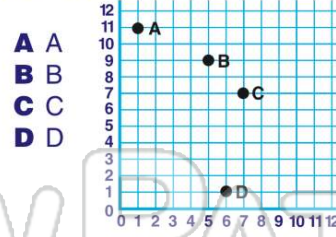


Name _____ Class _____ Date _____

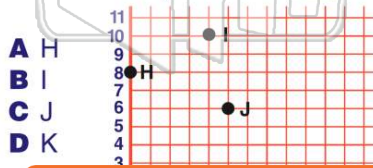
1 On the graph below the **coordinate (4,11)** is indicated by the letter _____.



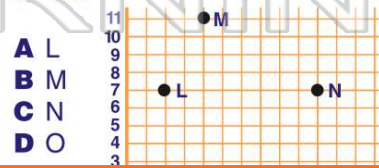
2 On the graph below the **coordinate (6,1)** is indicated by the letter _____.



3 On the graph below the **coordinate (0,8)** is indicated by the letter _____.



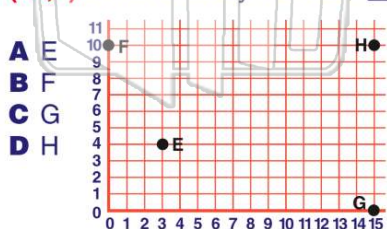
4 On the graph below the **coordinate (10,7)** is indicated by the letter _____.



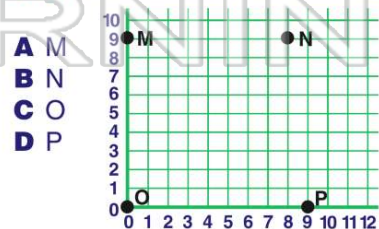
PREVIEW

Please [Sign In](#) or [Sign Up](#) to download the printable version of this worksheet

9 On the graph below the **coordinate (15,0)** is indicated by the letter _____.



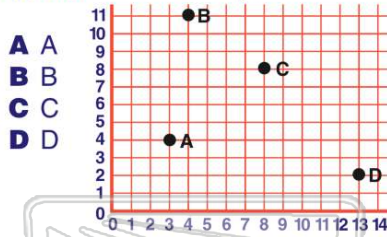
10 On the graph below the **coordinate (0,9)** is indicated by the letter _____.





ANSWER KEY

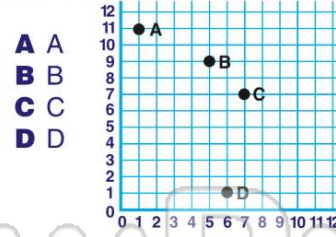
On the graph below the **coordinate (4,11)** is indicated by the letter ____.



- A A
- B B
- C C
- D D

(b)

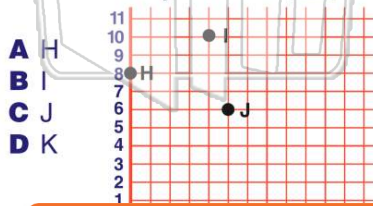
On the graph below the **coordinate (6,1)** is indicated by the letter ____.



- A A
- B B
- C C
- D D

(d)

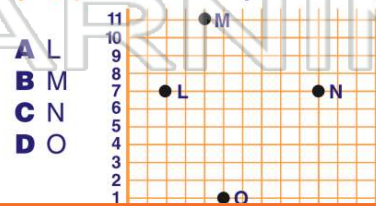
On the graph below the **coordinate (0,8)** is indicated by the letter ____.



- A H
- B I
- C J
- D K

(a)

On the graph below the **coordinate (10,7)** is indicated by the letter ____.



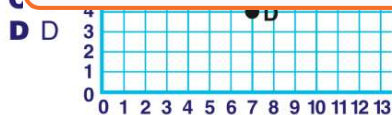
- A L
- B M
- C N
- D O

(c)

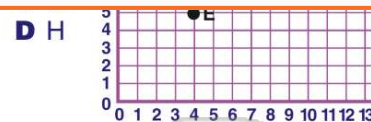


PREVIEW

Please [Sign In](#) or [Sign Up](#) to download the printable version of this worksheet

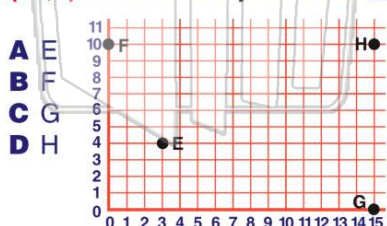


- D D



- D H

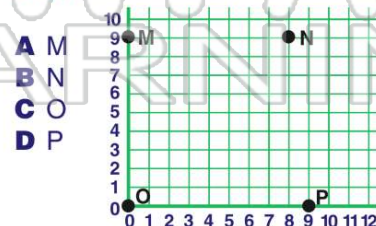
On the graph below the **coordinate (15,0)** is indicated by the letter ____.



- A E
- B F
- C G
- D H

(c)

On the graph below the **coordinate (0,9)** is indicated by the letter ____.



- A M
- B N
- C O
- D P

(a)