



Name _____ Class _____ Date _____

1


Squares are rectangles.



A true
B false

2

Rectangles can be squares.

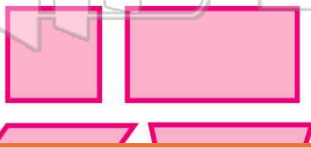


A true
B false

3

All quadrilaterals have four parallel sides.

A true
B false



4

All quadrilaterals have four sides.

A true
B false



5



PREVIEW

7

Please [Sign In](#) or [Sign Up](#) to download the printable version of this worksheet

9

The angles of squares and rectangles are right angles.




A true
B false

10

Some quadrilaterals have only one set of parallel lines.

A true
B false





ANSWER KEY

Squares are **rectangles**.



A true
B false

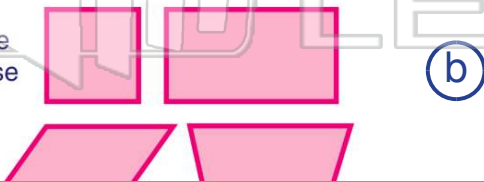
Rectangles can be **squares**.



A true
B false


All quadrilaterals have **four parallel sides**.

A true
B false



All quadrilaterals have **four sides**.

A true
B false



PREVIEW

Please [Sign In](#) or [Sign Up](#) to download the printable version of this worksheet

A true
B false

The angles of **squares** and **rectangles** are **right angles**.



A true
B false

Some **quadrilaterals** have only **one set of parallel lines**.

A true
B false

