




Name _____ Class _____ Date _____

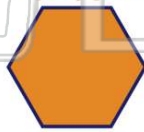
1 Which is not a property of a **square**?

- A All angles are equal size.
- B All sides are equal length.
- C Only two sides are equal length.
- D All angles equal 360° .

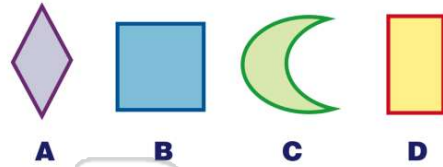


3 Which is not a property of a **polygon**?

- A Sides are curved.
- B All lines connect.
- C Lines do not cross.
- D There are more than two sides.



2 Identify the shape that is not a **polygon**.



4 Which is not a property of a **rectangle**?

- A All angles are equal size.
- B Opposite sides are the same length.
- C Opposite sides are parallel.




PREVIEW

Please [Sign In](#) or [Sign Up](#) to download the printable version of this worksheet

- 7
- B Opposite sides are the same length.
 - C Opposite sides are parallel.
 - D No angles are right angles.

- A 180 degrees.
- B There are always three sides.
- C There is one pair of parallel sides.
- D There are always three angles.

9 Squares are a type of rectangle.
True or false?



10 Rectangles can be squares.
True or false?






ANSWER KEY

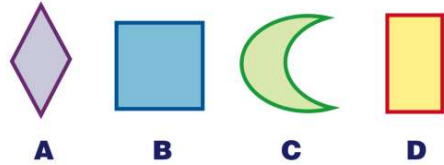
Which is not a property of a **square**?

- A All angles are equal size.
- B All sides are equal length.
- C Only two sides are equal length.
- D All angles equal 360° .



(C)

Identify the shape that is not a **polygon**.



(C)

Which is not a property of a **polygon**?

- A Sides are curved.
- B All lines connect.
- C Lines do not cross.
- D There are more than two sides.



(a)

Which is not a property of a **rectangle**?

- A All angles are equal size.
- B Opposite sides are the same length.
- C Opposite sides are parallel.
- D Opposite angles equal 360 degrees.



(d)



PREVIEW


Please [Sign In](#) or [Sign Up](#) to download the printable version of this worksheet

- C Opposite sides are parallel.
- D No angles are right angles.

- B There are always three sides.
- C There is one pair of parallel sides.
- D There are always three angles.

Squares are a type of rectangle.

True or false?



(a)

Rectangles can be squares.

True or false?



(b)