



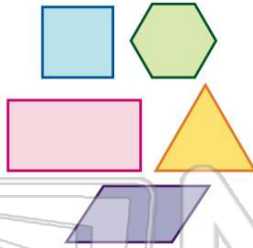
Name _____ Class _____ Date _____

1

All polygons have four sides.

True or false?

- A true
- B false

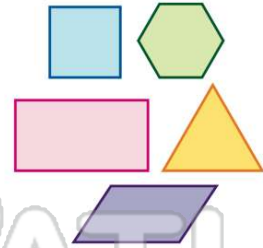


2

All angles of polygons equal 180° .

True or false?

- A true
- B false



3

The angles of a rhombus are all equal.

True or false?

- A true
- B false



4

A circle can be a polygon.

True or false?

- A true
- B false



5



PREVIEW

Please [Sign In](#) or [Sign Up](#) to download the printable version of this worksheet

7

- A true
- B false



- C rhombus
- D trapezoid



9

Identify the **polygon**.

- A rhombus
- B rectangle
- C triangle
- D trapezoid



10

Identify the **polygon**.

- A hexagon
- B pentagon
- C rhombus
- D trapezoid



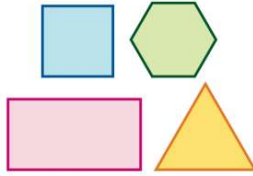


ANSWER KEY

All polygons have four sides.

True or false?

- A true
- B false

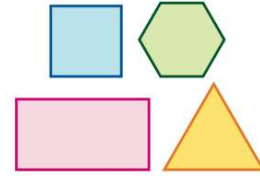


(b)

All angles of polygons equal 180° .

True or false?

- A true
- B false

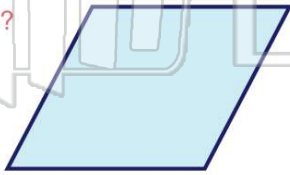


(b)

The angles of a rhombus are all equal.

True or false?

- A true
- B false




(b)

A circle can be a polygon.

True or false?

- A true
- B false



(b)



PREVIEW

Please [Sign In](#) or [Sign Up](#) to download the printable version of this worksheet

Identify the **polygon**.

- A rhombus
- B rectangle
- C triangle
- D trapezoid



(c)

Identify the **polygon**.

- A hexagon
- B pentagon
- C rhombus
- D trapezoid



(b)