



Name _____ Class _____ Date _____

1 Identify the **polygon**.

- A parallelogram
- B rectangle
- C rhombus
- D trapezoid



2 Identify the **polygon**.

- A square
- B parallelogram
- C rhombus
- D rectangle



3 Identify the **polygon**.

- A circle
- B hexagon
- C octagon
- D quadrilateral



4 Identify the shape that is **not** a **polygon**.

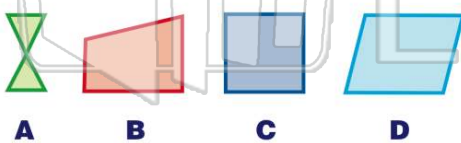


PREVIEW

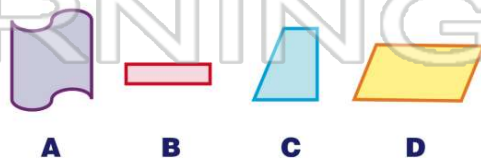
7 Please [Sign In](#) or [Sign Up](#) to download the printable version of this worksheet



9 Identify the shape that is **not** a **polygon**.



10 Identify the shape that is **not** a **polygon**.





ANSWER KEY

Identify the **polygon**.

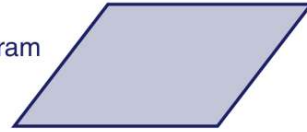
- A parallelogram
- B rectangle
- C rhombus
- D trapezoid



(d)

Identify the **polygon**.

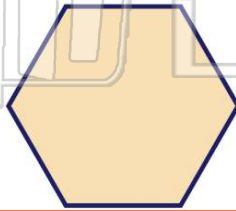
- A square
- B parallelogram
- C rhombus
- D rectangle



(b)

Identify the **polygon**.

- A circle
- B hexagon
- C octagon
- D quadrilateral



(b)

Identify the shape that is **not** a **polygon**.



A

B

C

D

(b)



PREVIEW

Please [Sign In](#) or [Sign Up](#) to download the printable version of this worksheet

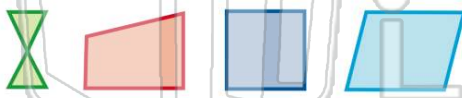
A

B

C

D

Identify the shape that is **not** a **polygon**.



A

B

C

D

(a)

Identify the shape that is **not** a **polygon**.



A

B

C

D

(a)