



Polygons

Math
D

Name _____ Class _____ Date _____

1 Which is not a property of a square?

Cross it out.

All angles are equal size.

All sides are equal length.

Only two sides are equal length.



6 Circle the **pentagon**.

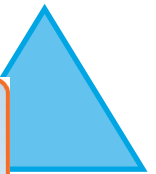


2 A polygon with **four sides** is called a **quadrilateral**.

True or false?



7 Cross out the shape that is not a polygon.



3 A _____



_____ polygon?



4 C
th

Please [Sign In](#) or [Sign Up](#) to download the printable version of this worksheet

square rhombus
parallelogram rectangle

5 Circle the name of this **polygon**.



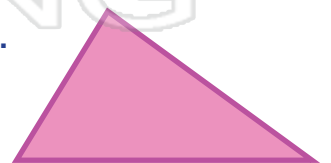

10 A polygon with **3 sides** is called a _____.

square

trapezoid

circle

rectangle





Polygons - Answer Key

Name _____ Class _____ Date _____

1 Which is not a property of a square?

Cross it out.

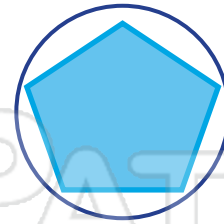
All angles are equal size.

All sides are equal length.

~~Only two sides are equal length.~~



6 Circle the **pentagon**.

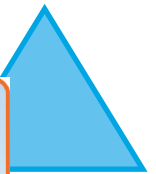


2 A polygon with **four sides** is called a **quadrilateral**.

True or false?



7 Cross out the shape that is not a polygon.



3 A _____



_____ polygon?




4 C
th

PREVIEW

Please [Sign In](#) or [Sign Up](#) to download the printable version of this worksheet

parallelogram

rectangle



5 Circle the name of this **polygon**.



square

trapezoid

circle

rectangle

10 A polygon with **3 sides** is called a triangle.

