



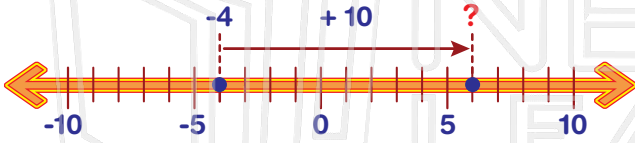
# Adding & Subtracting Integers

Math  
F

Name \_\_\_\_\_ Class \_\_\_\_\_ Date \_\_\_\_\_

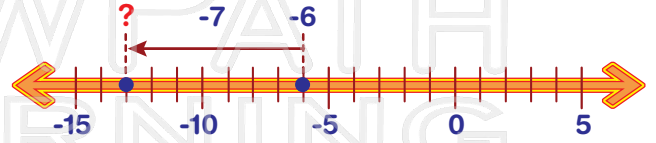
1 Add the integers.

$$-4 + 10 = \square$$



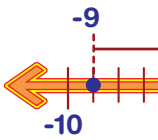
6 Subtract the integers.

$$-6 - 7 = \square$$



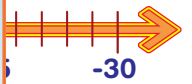
2 Add the integers.

$$-9 + 14 = \square$$



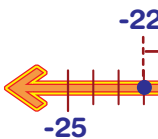
7 Subtract the integers.

$$-36 - 12 = \square$$



3 Add the integers.

$$-22 + 1 = \square$$

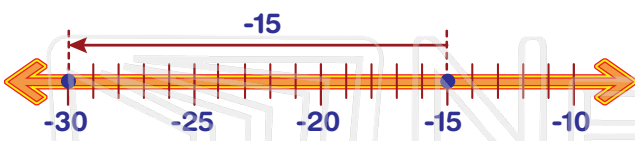


## PREVIEW

Please [Sign In](#) or [Sign Up](#) to download the printable version of this worksheet

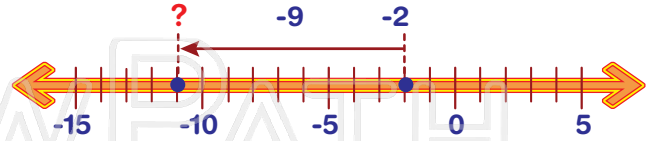
4 Add the integers.

$$-15 + (-15) = \square$$



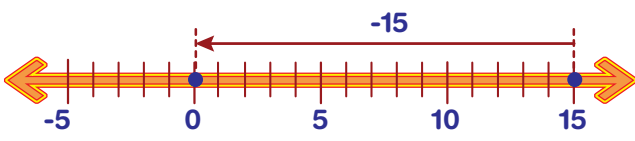
9 Subtract the integers.

$$-2 - (-9) = \square$$



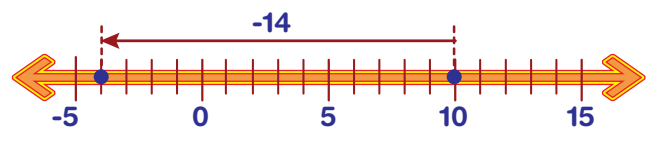
5 Add the integers.

$$15 + (-15) = \square$$



10 Subtract the integers.

$$10 - 14 = \square$$





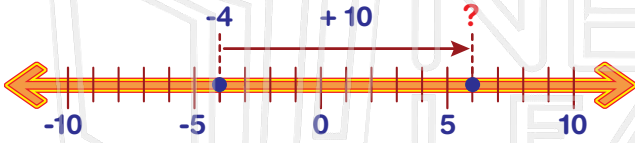
# Adding & Subtracting Integers - Answer Key

Math  
F

Name \_\_\_\_\_ Class \_\_\_\_\_ Date \_\_\_\_\_

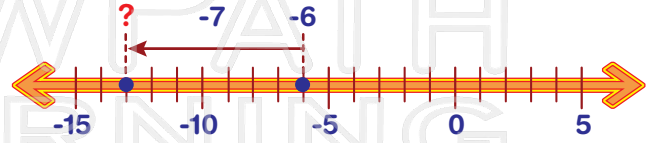
1 Add the integers.

$$-4 + 10 = 6$$



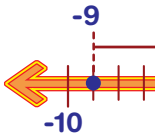
6 Subtract the integers.

$$-6 - 7 = -13$$



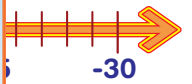
2 Add the integers.

$$-9 + 14 = 5$$



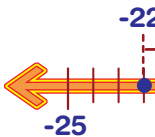
7 Subtract the integers.

$$-36 - 12 = -48$$



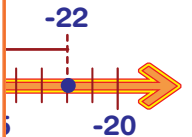
3 Add the integers.

$$-22 + 1 = -21$$



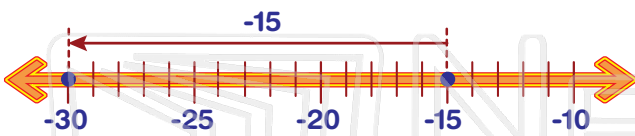
## PREVIEW

Please [Sign In](#) or [Sign Up](#) to download the printable version of this worksheet



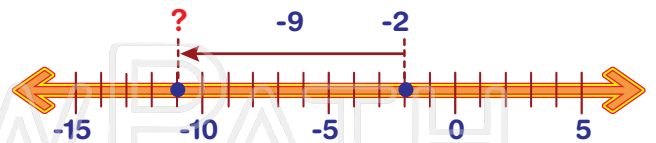
4 Add the integers.

$$-15 + (-15) = -30$$



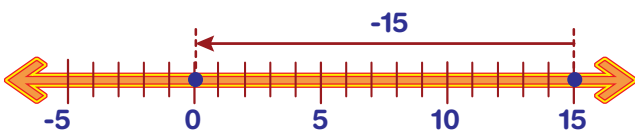
9 Subtract the integers.

$$-2 - (-9) = 7$$



5 Add the integers.

$$15 + (-15) = 0$$



10 Subtract the integers.

$$10 - 14 = -4$$

