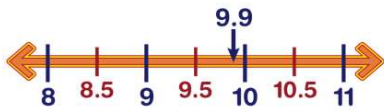




Rounding

Name _____ Class _____ Date _____

1 Round to the nearest whole number: 9.9



- A 10
- B 9
- C 11
- D 8

3 Round to the nearest whole number.

- A 0
- B 1
- C 2
- D 3



2 Round to the nearest whole number.

- A 2
- B 4
- C 3
- D 0



4 Round to the nearest whole number: 8.4

- A 8
- B 7
- C 9
- D 10



5



PREVIEW

Please [Sign In](#) or [Sign Up](#) to download the printable version of this worksheet

7

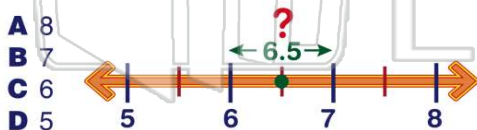


- A 8
- B 7
- C 6
- D 9



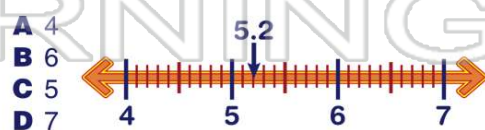
- A 2
- B 3

9 Round to the nearest whole number: 6.5



- A 8
- B 7
- C 6
- D 5

10 Round to the nearest whole number: 5.2

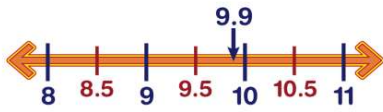


- A 4
- B 6
- C 5
- D 7



ANSWER KEY

Round to the nearest whole number: 9.9



- A 10
- B 9
- C 11
- D 8

(a)

Round to the nearest whole number.

- A 2
- B 4
- C 3
- D 0



(c)

Round to the nearest whole number.

- A 0
- B 1
- C 2
- D 3



(b)

Round to the nearest whole number: 8.4

- A 8
- B 7
- C 9
- D 10



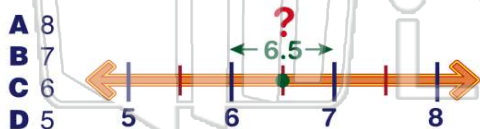
(a)



PREVIEW

Please [Sign In](#) or [Sign Up](#) to download the printable version of this worksheet

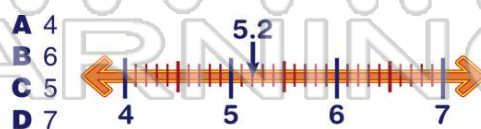
Round to the nearest whole number: 6.5



- A 8
- B 7
- C 6
- D 5

(b)

Round to the nearest whole number: 5.2



- A 4
- B 6
- C 5
- D 7

(c)