

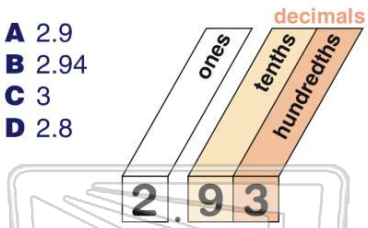


Rounding

Name _____ Class _____ Date _____

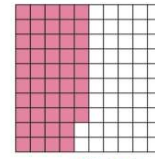
1 Round to the nearest tenth: 2.93

- A 2.9
- B 2.94
- C 3
- D 2.8



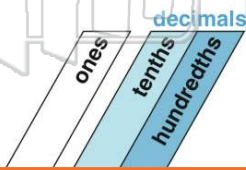
2 Round to the nearest tenth: 0.48

- A 1
- B 0.3
- C 0.4
- D 0.5



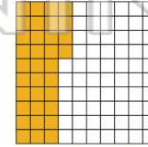
3 Round to the nearest tenth: 9.08

- A 9
- B 9.1
- C 9.9
- D 9.7



4 Round to the nearest tenth: 0.34

- A 0.4
- B 0.3
- C 0.35
- D 0.34



5



PREVIEW

Please [Sign In](#) or [Sign Up](#) to download the printable version of this worksheet

7

- C 3.08
- D 3.07



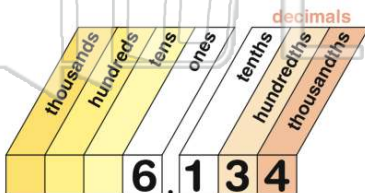
- C 10.00
- D 9.7



9

Round to the nearest hundredth: 6.134

- A 6.14
- B 6.00
- C 6.13
- D 6.12



10

Round to the nearest hundredth.

- A 1.28
- B 1.27
- C 2.00
- D 1.30

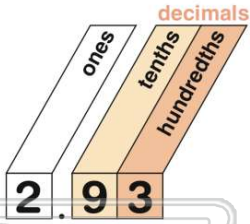




ANSWER KEY

Round to the nearest tenth: 2.93

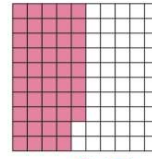
- A 2.9
- B 2.94
- C 3
- D 2.8



(a)

Round to the nearest tenth: 0.48

- A 1
- B 0.3
- C 0.4
- D 0.5

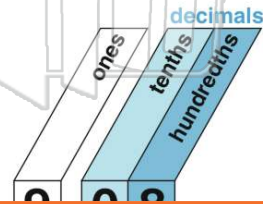


.48

(d)

Round to the nearest tenth: 9.08

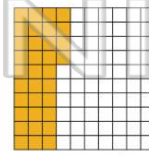
- A 9
- B 9.1
- C 9.9
- D 9.7



(b)

Round to the nearest tenth: 0.34

- A 0.4
- B 0.3
- C 0.35
- D 0.34



.34

(b)



PREVIEW

Please [Sign In](#) or [Sign Up](#) to download the printable version of this worksheet

3.07

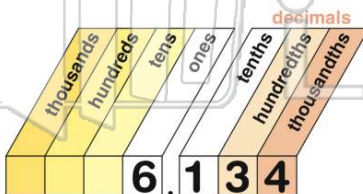


9.7



Round to the nearest hundredth: 6.134

- A 6.14
- B 6.00
- C 6.13
- D 6.12



(c)

Round to the nearest hundredth.

- A 1.28
- B 1.27
- C 2.00
- D 1.30

1.277

(a)