



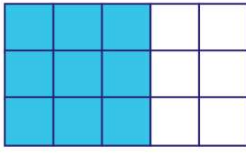
Simplify Fractions

Math
E

Name _____ Class _____ Date _____

1

The simplest form of $\frac{9}{15}$ is .



- A $\frac{3}{5}$ B $\frac{2}{5}$ C $\frac{9}{15}$ D $\frac{4}{5}$

3

The simplest form of $\frac{3}{27}$ is .

- A $\frac{3}{9}$ C $\frac{3}{27}$

2

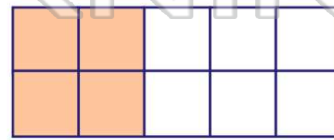
The simplest form of $\frac{7}{35}$ is .

- A $\frac{3}{5}$ C $\frac{7}{5}$

- B $\frac{2}{5}$ D $\frac{1}{5}$

4

The simplest form of $\frac{4}{10}$ is .



5



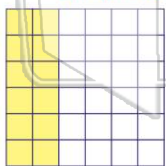
PREVIEW

7

Please [Sign In](#) or [Sign Up](#) to download the printable version of this worksheet

9

The simplest form of $\frac{12}{36}$ is .



- A $\frac{3}{5}$ B $\frac{2}{5}$ C $\frac{1}{3}$ D $\frac{2}{3}$

10

The simplest form of $\frac{6}{9}$ is .

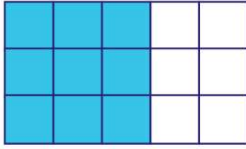
- A $\frac{1}{3}$ C $\frac{6}{9}$

- B $\frac{2}{3}$ D $\frac{1}{9}$



ANSWER KEY

The **simplest form** of $\frac{9}{15}$ is .



- A** $\frac{3}{5}$ **B** $\frac{2}{5}$ **C** $\frac{9}{15}$ **D** $\frac{4}{5}$

(a)

The **simplest form** of $\frac{7}{35}$ is .

A $\frac{3}{5}$

C $\frac{7}{5}$

(d)

B $\frac{2}{5}$

D $\frac{1}{5}$

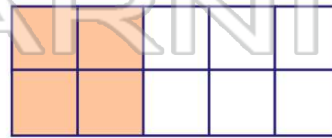
The **simplest form** of $\frac{3}{27}$ is .

A $\frac{3}{9}$

C $\frac{3}{27}$

(b)

The **simplest form** of $\frac{4}{10}$ is .



(a)

B $\frac{1}{9}$

D $\frac{1}{27}$

A $\frac{2}{5}$

B $\frac{4}{10}$

C $\frac{1}{10}$

D $\frac{2}{5}$



PREVIEW

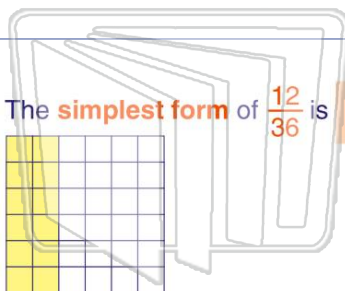
Please [Sign In](#) or [Sign Up](#) to download the printable version of this worksheet

B $\frac{1}{6}$

D $\frac{1}{7}$

B $\frac{1}{5}$

D $\frac{1}{3}$



The **simplest form** of $\frac{12}{36}$ is .

A $\frac{3}{5}$

B $\frac{2}{5}$

C $\frac{1}{3}$

D $\frac{2}{3}$

(c)

The **simplest form** of $\frac{6}{9}$ is .

A $\frac{1}{3}$

C $\frac{6}{9}$

(b)

B $\frac{2}{3}$

D $\frac{1}{9}$