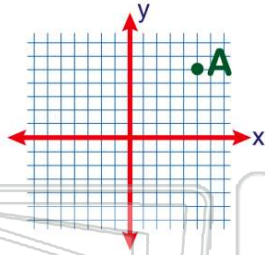




Name _____ Class _____ Date _____

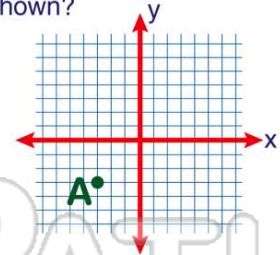
1 On the grid shown, **point A** is in which **quadrant**?

- A I
- B II
- C III
- D IV



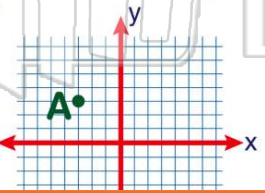
2 **Point A** is located in which **quadrant** on the grid shown?

- A I
- B II
- C III
- D IV



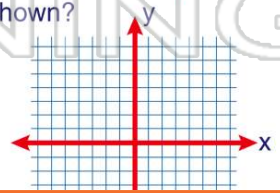
3 On the grid shown, in which **quadrant** is **point A**?

- A I
- B II
- C III
- D IV



4 **Point A** is located in which **quadrant** on the grid shown?

- A I
- B II
- C III
- D IV



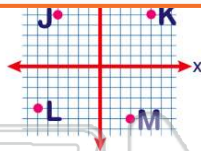
5



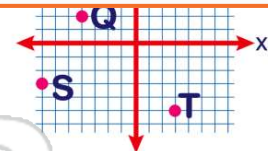
PREVIEW

7 Please [Sign In](#) or [Sign Up](#) to download the printable version of this worksheet

- A correct
- B incorrect

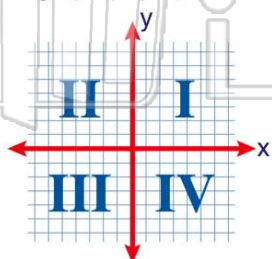


- C S
- D T



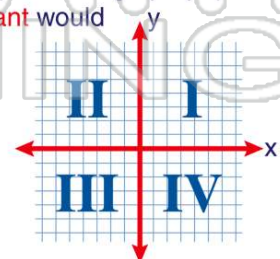
9 When plotting on graph paper, **point B (2, -3)** lies in which **quadrant**?

- A I
- B II
- C III
- D IV



10 Jim has to plot points on graph paper. In which **quadrant** would **point D (-3, 4)** be plotted?

- A I
- B II
- C III
- D IV

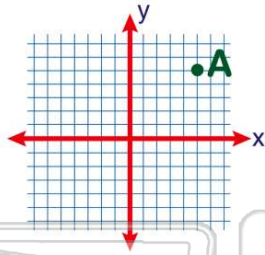




ANSWER KEY

On the grid shown, **point A** is in which quadrant?

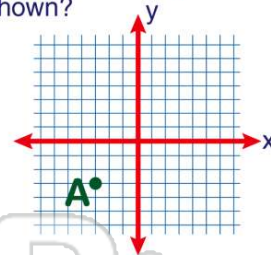
- A I
- B II
- C III
- D IV



(a)

Point A is located in which quadrant on the grid shown?

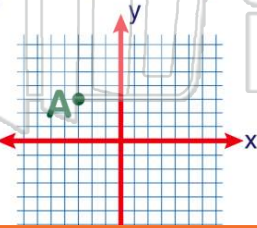
- A I
- B II
- C III
- D IV



(c)

On the grid shown, in which quadrant is **point A**?

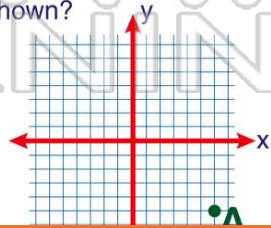
- A I
- B II
- C III
- D IV



(b)

Point A is located in which quadrant on the grid shown?

- A I
- B II
- C III
- D IV



(d)



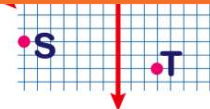
PREVIEW

Please [Sign In](#) or [Sign Up](#) to download the printable version of this worksheet

B incorrect

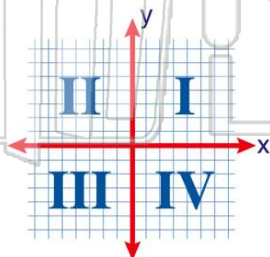


D T



When plotting on graph paper, **point B (2, -3)** lies in which quadrant?

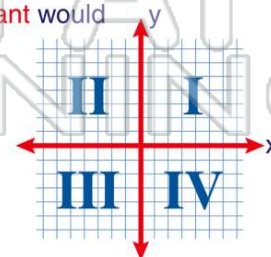
- A I
- B II
- C III
- D IV



(d)

Jim has to plot points on graph paper. In which quadrant would **point D (-3, 4)** be plotted?

- A I
- B II
- C III
- D IV



(b)