



Name \_\_\_\_\_ Class \_\_\_\_\_ Date \_\_\_\_\_

1 The place value that is two places to the right of the decimal point is the **tenths place**.

A true  
B false

thousands	hundreds	tens	ones	tenths	hundredths	thousandths
-----------	----------	------	------	--------	------------	-------------

2 What is the place value of the **5** in the number **408.351**?

A tenths  
B hundredths  
C thousandths  
D hundreds

thousands	hundreds	tens	ones	tenths	hundredths	thousandths
4	0	8	.	3	5	1

3 What is the place value of the **3** in the number **57.043**?

A ones  
B tenths  
C hundredths  
D thousandths

thousands	hundreds	tens	ones	tenths	hundredths	thousandths
-----------	----------	------	------	--------	------------	-------------

4 The fraction  $\frac{1}{10}$  can be changed into the decimal **0.1**.

A **TRUE**  
B **FALSE**

5

**PREVIEW**

7 Please [Sign In](#) or [Sign Up](#) to download the printable version of this worksheet

9

The fraction, **one fifth**, rewritten as a decimal is \_\_\_\_\_.

A 0.5  
B 0.1  
C 0.2  
D 0.1

10

A **true** B **false**

$\frac{3}{4} = \frac{?}{100}$

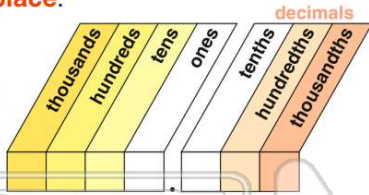
A 60  
B 75  
C 80  
D 70



## ANSWER KEY

The place value that is two places to the right of the decimal point is the **tenths place**.

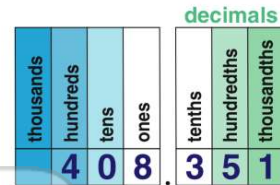
- A true
- B false



(b)

What is the place value of the **5** in the number **408.351**?

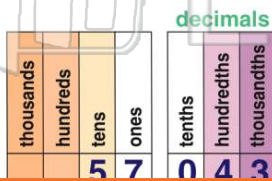
- A tenths
- B hundredths
- C thousandths
- D hundreds



(b)

What is the place value of the **3** in the number **57.043**?

- A ones
- B tenths
- C hundredths
- D thousandths



(d)

The fraction  $\frac{1}{10}$  can be changed into the decimal **0.1**.

A TRUE

B FALSE


(a)



## PREVIEW

Please [Sign In](#) or [Sign Up](#) to download the printable version of this worksheet

- C 0.06
- D 0.006



The fraction, **one fifth**, rewritten as a decimal is \_\_\_\_\_

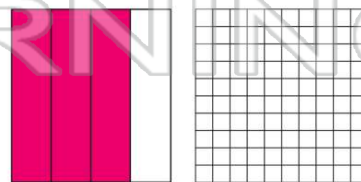
- A 0.5
- B 0.1
- C 0.2
- D 0.1



(c)

$$\frac{3}{4} = \frac{?}{100}$$

- A 60
- B 75
- C 80
- D 70



(b)