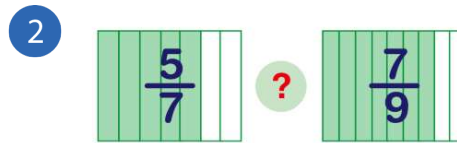
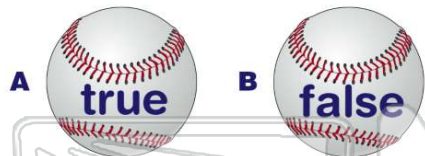




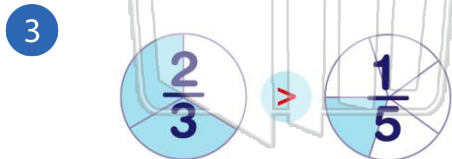
Ordering Fractions

Name _____ Class _____ Date _____

1 $\frac{7}{8} > \frac{5}{6}$



- A >
- B <
- C =



4 Order these fractions from **least to greatest**. $\frac{5}{6}$ $\frac{21}{33}$ $\frac{45}{66}$

- A $\frac{5}{6}$ $\frac{45}{66}$ $\frac{21}{33}$
- B $\frac{21}{33}$ $\frac{5}{6}$ $\frac{45}{66}$

A true



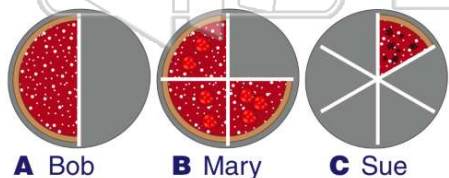
PREVIEW

7 Please [Sign In](#) or [Sign Up](#) to download the printable version of this worksheet

- A $\frac{7}{8}$ B $\frac{7}{9}$ C $\frac{7}{10}$ D $\frac{7}{12}$

- A true
- B false

9 Bob ate $\frac{1}{2}$ of a cheese pizza. Mary ate $\frac{1}{4}$ of a pepperoni pizza and Sue ate $\frac{5}{6}$ of a sausage pizza. **Who ate the most pizza?**



- A Bob B Mary C Sue

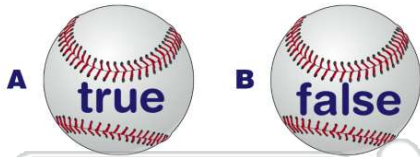
10 Order the fractions from **greatest to least**.

- A $\frac{1}{10}$ $\frac{1}{2}$ $\frac{2}{10}$ $\frac{2}{5}$
 - B $\frac{1}{10}$ $\frac{2}{5}$ $\frac{1}{2}$ $\frac{2}{10}$
 - C $\frac{1}{2}$ $\frac{2}{5}$ $\frac{2}{10}$ $\frac{1}{10}$
- $\frac{1}{10}$
 $\frac{2}{5}$
 $\frac{1}{2}$
 $\frac{2}{10}$

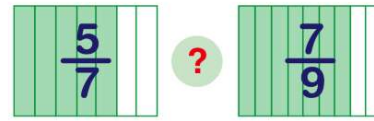


ANSWER KEY

$$\frac{7}{8} > \frac{5}{6}$$

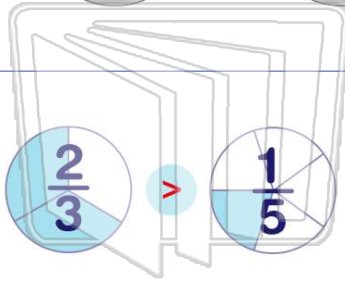


(a)



(b)

- A >
- B <
- C =



(a)

- A true
- B false

Order these fractions from **least to greatest**. $\frac{5}{6}$ $\frac{21}{33}$ $\frac{45}{66}$

- A $\frac{5}{6}$ $\frac{45}{66}$ $\frac{21}{33}$
- B $\frac{21}{33}$ $\frac{5}{6}$ $\frac{45}{66}$
- C $\frac{21}{33}$ $\frac{45}{66}$ $\frac{5}{6}$

(c)



PREVIEW

Please [Sign In](#) or [Sign Up](#) to download the printable version of this worksheet

- A $\frac{7}{8}$
- B $\frac{7}{9}$
- C $\frac{7}{10}$
- D $\frac{7}{12}$

- A true
- B false

Bob ate $\frac{1}{2}$ of a cheese pizza. Mary ate $\frac{1}{4}$ of a pepperoni pizza and Sue ate $\frac{5}{6}$ of a sausage pizza. **Who ate the most pizza?**



- A Bob
- B Mary
- C Sue

(c)

Order the fractions from **greatest to least**.

- A $\frac{1}{10}$ $\frac{1}{2}$ $\frac{2}{10}$ $\frac{2}{5}$
- B $\frac{1}{10}$ $\frac{2}{5}$ $\frac{1}{2}$ $\frac{2}{10}$
- C $\frac{1}{2}$ $\frac{2}{5}$ $\frac{2}{10}$ $\frac{1}{10}$

$\frac{1}{10}$
 $\frac{2}{5}$
 $\frac{1}{2}$
 $\frac{2}{10}$

(c)