



Name \_\_\_\_\_ Class \_\_\_\_\_ Date \_\_\_\_\_

1 The **median** and the **mean** are always the same value.

True or false?

A **true** B **false**

2 The **mode** is the value that appears **most often**.

True or false?

A true  
B false

3 Another name for the **median** is the **average**.

True or false?

A **true** B **false**

4 The **mean** for these values is **51**.

**34 54 65**

True or false?

A true



## PREVIEW

Please [Sign In](#) or [Sign Up](#) to download the printable version of this worksheet

7 True or false?

A true  
B false

8 True or false?

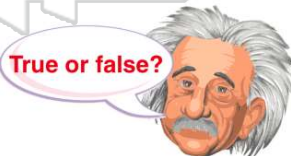
A **TRUE** B **FALSE**

9 Both the **mean** and the **median** for these values are **45**.

**10, 25, 40, 45, 50, 65, 80**

A true  
B false

True or false?



10 Both the **mean** and the **median** for these values are **38**.

**11, 30, 38, 40, 67**

True or false?

A true  
B false



## ANSWER KEY

The **median** and the **mean** are always the same value.

True or false?

**A** **true**    **B** **false**

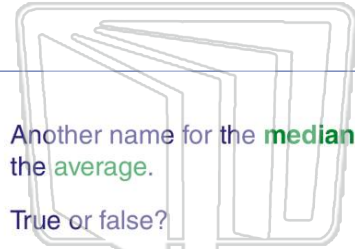
(b)

The **mode** is the value that appears **most often**.

True or false?

**A** true  
**B** false

(a)



Another name for the **median** is the **average**.

True or false?

**A** **true**    **B** **false**

(b)

The **mean** for these values is 51.

**34** **54** **65**

True or false?

**A** true  
**B** false

(a)

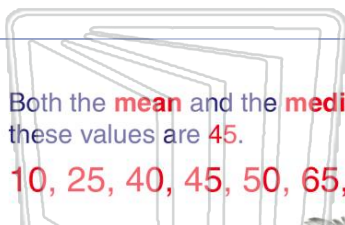


## PREVIEW

Please [Sign In](#) or [Sign Up](#) to download the printable version of this worksheet

**A** true  
**B** false

**A** **TRUE**    **B** **FALSE**




Both the **mean** and the **median** for these values are 45.

**10**, **25**, **40**, **45**, **50**, **65**, **80**

**A** true  
**B** false

True or false?



(a)

Both the **mean** and the **median** for these values are 38.

**11**, **30**, **38**, **40**, **67**

True or false?

**A** true  
**B** false

(b)