



Name _____ Class _____ Date _____

- 1 A shoe store asked customers their shoe sizes. The sizes were **8, 10, 7, 5, 10, 11, 5, 7, 9, and 5**.
What is the **mode** of the shoe sizes?

- A 10
- B 8
- C 7
- D 5




- 3 Mr. Brown plays 9 holes of golf. His score for each hole is: **3, 4, 4, 5, 5, 5, 6, 7, 7**.
What is the **median** of the scores?



- 2 On an exam, a class scored the following grades: **100, 95, 97, 84, 54, 66, 86, and 73**.
What is the **range** of the test scores?

- A 46
- B 51
- C 81
- D 85



- 4 A family has six members. Their heights are **69", 60", 79", 64", 48", and 75"**.
What is the **mean** of their heights?

- A 79"
- B 66"



PREVIEW

Please [Sign In](#) or [Sign Up](#) to download the printable version of this worksheet

- 7
her scores?

- A 88
- B 92
- C 93
- D 96

what is the **median** of the runs scored?

- A 5
- B 10
- C 12
- D 19



- 9 Colby bowls three times a week. Each time he bowls three games. His scores are: **210, 154, 176, 149, 242, 137, 93, 142, 217**.
What is the **mean** of his scores?

- A 201
- B 173
- C 169
- D 154



- 10 A farmer picks pumpkins from his field to sell. The weights of the pumpkins, in pounds, are: **24, 11, 23, 8, 15, 22, 22, 11, 15, 22, 10, 24**.
What is the **mean** of the pumpkins' weights?

What is the **mean** of the pumpkins' weights?

- A 8
- B 11.25
- C 17.25
- D 22





ANSWER KEY

A shoe store asked customers their shoe sizes. The sizes were **8, 10, 7, 5, 10, 11, 5, 7, 9, and 5.**

What is the **mode** of the shoe sizes?

- A 10
- B 8
- C 7
- D 5




(d)

On an exam, a class scored the following grades: **100, 95, 97, 84, 54, 66, 86, and 73.**

What is the **range** of the test scores?

- A 46
- B 51
- C 81
- D 85



(a)

Mr. Brown plays 9 holes of golf. His score for each hole is: **3, 4, 4, 5, 5, 5, 6, 7, 7.**

What is the **median** of the scores?

- A 3
- B 4
- C 5
- D 7




(c)

A family has six members. Their heights are **69", 60", 79", 64", 48", and 75".**

What is the **mean** of their heights?

- A 79"
- B 66"
- C 64"



(b)



PREVIEW


Please [Sign In](#) or [Sign Up](#) to download the printable version of this worksheet

- A 88
- B 92
- C 93
- D 96

Colby bowls three times a week. Each time he bowls three games. His scores are: **210, 154, 176, 149, 242, 137, 93, 142, 217.**

What is the **mean** of his scores?

- A 201
- B 173
- C 169
- D 154



(c)

the fans scored:

- A 5
- B 10
- C 12
- D 19

A farmer picks pumpkins from his field to sell. The weights of the pumpkins, in pounds, are: **24, 11, 23, 8, 15, 22, 22, 11, 15, 22, 10, 24.**

What is the **mean** of the pumpkins' weights?

- A 8
- B 11.25
- C 17.25
- D 22



(c)