



Name _____ Class _____ Date _____

1 The frequency table shows ways that children are transported to school. **What method of transportation is used the least?**

- A walking
- B taking the bus
- C driven by parent
- D riding bike

Transportation to School	
Transportation	Frequency
Walking	
Taking bus	
Driven by parent	
Riding bike	

2 Jennifer went to the zoo and kept track of how many monkeys, snakes, birds, and bears she saw. The results are shown in the frequency table. **Which type of animal did she see the most?**

- A monkeys
- B snakes
- C birds
- D bears

Zoo Animals	
Animal	Frequency
Monkeys	
Snakes	
Birds	
Bears	

3 The frequency table shows what students bought for lunch. **How many of the students bought pizza or chicken nuggets?**

- A 15
- B 16
- C 20

School Lunches	
Lunch	Frequency
Pizza	
Chicken	

4 Ruth was at the park. She counted the number of pine, oak, and elm trees. The results are shown in the frequency table. **Which type of tree is most common?**

- A pine
- B oak

Trees in the Park	
Type of Tree	Frequency
Pine	
Oak	

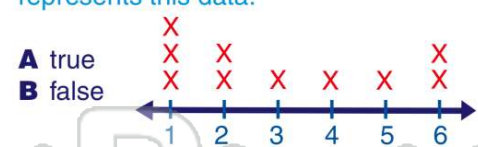
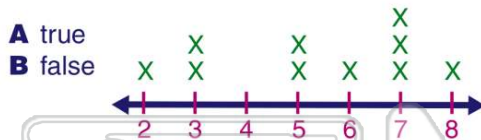
5



PREVIEW

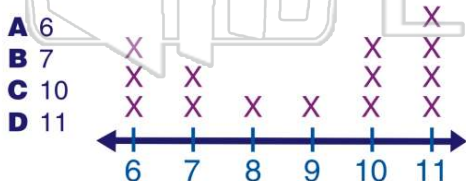
Please [Sign In](#) or [Sign Up](#) to download the printable version of this worksheet

7



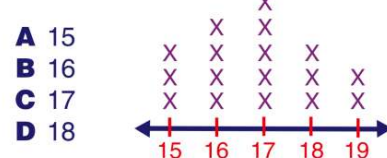
9

On the line plot shown, which number occurs **most frequently**?



10

The line plot shown represents the ages at which teenagers get their driver's licenses. **How old are most teenagers when they get their licenses?**





ANSWER KEY

The frequency table shows ways that children are transported to school.

What method of transportation is used the **least**?

- A walking
- B taking the bus
- C driven by parent
- D riding bike

Transportation to School	
Transportation	Frequency
Walking	
Taking bus	
Driven by parent	
Riding bike	

(a)

Jennifer went to the zoo and kept track of how many monkeys, snakes, birds, and bears she saw. The results are shown in the frequency table.

Which type of animal did she see the **most**?

- A monkeys
- B snakes
- C birds
- D bears

Zoo Animals	
Animal	Frequency
Monkeys	
Snakes	
Birds	
Bears	

(c)

The frequency table shows what students bought for lunch. How many of the students bought **pizza or chicken nuggets**?

- A 15
- B 16
- C 29
- D 31

School Lunches	
Lunch	Frequency
Pizza	
Chicken	

(d)

Ruth was at the park. She counted the number of pine, oak, and elm trees. The results are shown in the frequency table.

Which type of tree is **most common**?

- A pine
- B oak
- C elm

Trees in the Park	
Type of Tree	Frequency
Pine	
Oak	
Elm	

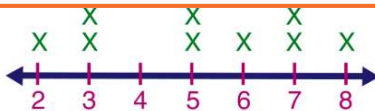
(b)



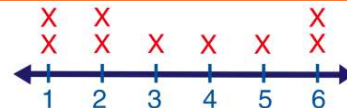
PREVIEW

Please [Sign In](#) or [Sign Up](#) to download the printable version of this worksheet

- A true
- B false

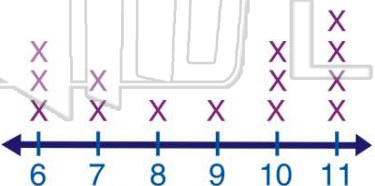


- A true
- B false



On the line plot shown, which number occurs **most frequently**?

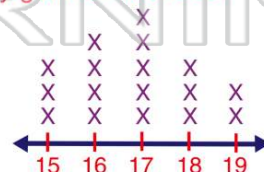
- A 6
- B 7
- C 10
- D 11



(d)

The line plot shown represents the ages at which teenagers get their driver's licenses. How old are **most teenagers** when they get their licenses?

- A 15
- B 16
- C 17
- D 18



(c)