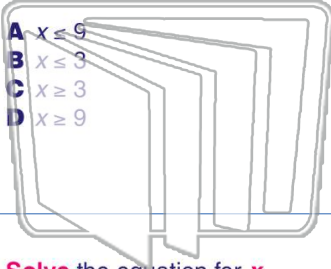




Name _____ Class _____ Date _____

1 Solve the equation for x .
 $4x + 12 \geq 24$



- A $x \leq 9$
- B $x \leq 3$
- C $x \geq 3$
- D $x \geq 9$

2 Solve the equation for x .
 $15 + 2x \leq 25$

- A $x \leq 5$
- B $x \leq 20$
- C $x \geq 20$
- D $x \geq 5$

NEWPATH LEARNING

3 Solve the equation for x .
 $3x + 2 \leq 20$

4 Solve the equation for x .
 $7x + 14 \geq 21$

5



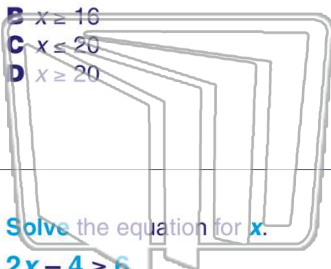
PREVIEW

Please [Sign In](#) or [Sign Up](#) to download the printable version of this worksheet

7

$$15 - \frac{x}{2} \geq 3$$

- A $x \leq 16$
- B $x \geq 16$
- C $x \leq 20$
- D $x \geq 20$



$$16 - \frac{x}{3} \geq 24$$

- A $x \leq -18$
- B $x \geq -18$
- C $x \leq 18$
- D $x \geq 18$

NEWPATH LEARNING

9

Solve the equation for x .
 $2x - 4 \geq 6$

- A $x \geq 1$
- B $x \leq 1$
- C $x \leq 5$
- D $x \geq 5$

10

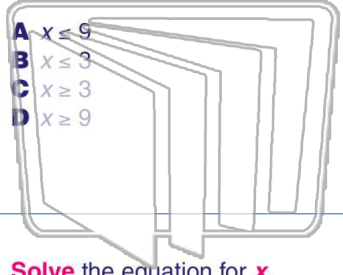
Solve the equation for x .
 $10x - 12 \leq 18$

- A $x \leq 3$
- B $x \geq 3$
- C $x \leq 6$
- D $x \geq 6$



Name _____ Class _____ Date _____

1 Solve the equation for x .
 $4x + 12 \geq 24$



- A $x \leq 9$
- B $x \leq 3$
- C $x \geq 3$
- D $x \geq 9$

2 Solve the equation for x .
 $15 + 2x \leq 25$

- A $x \leq 5$
- B $x \leq 20$
- C $x \geq 20$
- D $x \geq 5$

3 Solve the equation for x .
 $3x + 2 \leq 20$

4 Solve the equation for x .
 $7x + 14 \geq 21$

5



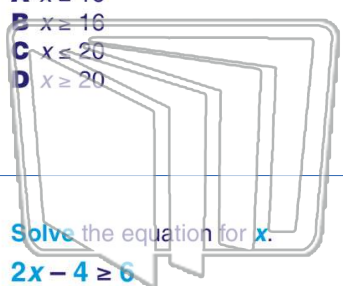
PREVIEW

Please [Sign In](#) or [Sign Up](#) to download the printable version of this worksheet

7

$$15 - \frac{x}{2} \geq 3$$

- A $x \leq 16$
- B $x \geq 16$
- C $x \leq 20$
- D $x \geq 20$



$$16 - \frac{x}{3} \geq 24$$

- A $x \leq -18$
- B $x \geq -18$
- C $x \leq 18$
- D $x \geq 18$

9

Solve the equation for x .
 $2x - 4 \geq 6$

- A $x \geq 1$
- B $x \leq 1$
- C $x \leq 5$
- D $x \geq 5$

10

Solve the equation for x .
 $10x - 12 \leq 18$

- A $x \leq 3$
- B $x \geq 3$
- C $x \leq 6$
- D $x \geq 6$