



Name _____ Class _____ Date _____

1 According to the **bar graph** shown, in which **state** are there the **most pools**?

Pools Owned in the U.S.

State	Number of Pools (in Thousands)
NY	400
FL	650
GA	550
PA	450

A New York
B Florida
C Georgia
D Pennsylvania

2 According to the **bar graph** shown, how much **more corn** is grown than cabbage?

Crops Grown in Ohio

Crop	Amount (in tons)
Beans	50
Corn	80
Cabbage	45
Tomatoes	40

A 30 tons more
B 35 tons more
C 40 tons more
D 45 tons more

3 The **bar graph** shown represents the three most popular types of breakfast food liked by a survey of **100 people**. How many people liked **eggs more than cereal**?

Popular Breakfast Foods

Food	Number of People
Cereal	40
Eggs	20
Toast	40

A 10 people
B 20 people
C 25 people

4 According to the **histogram** shown of Summer Elementary School, what **grade** has the **least number of children** in school?

Children / Grade at Summer Elementary School

Grade	Number of Children
1st grade	35
2nd grade	40
3rd grade	55
4th grade	60
5th grade	65
6th grade	70

A 1st grade
B 3rd grade
C 5th grade
D 6th grade

5

PREVIEW

Please [Sign In](#) or [Sign Up](#) to download the printable version of this worksheet

7

13, 22, 14, 11.

True or false?

A true
B false

Hours	Frequency
5 - 9	
10 - 14	
15 - 19	
20 - 24	
25 - 29	

8

table he made as shown is correct.

True or false?

A true **B** false

Number of Cars Owned	Frequency
1	
2	
3	
4	
5	

9

According to the **frequency table** shown, which statement is **correct**?

A The fewest watched 6-8 hrs.
B Twice as many watched 2-4 hrs than 8-10 hrs.
C Twice as many watched 4-6 hrs than 0-2 hrs.
D Half as many watched 6-8 hrs than 2-4 hrs.

Hours	Frequency
0 - 2	
2 - 4	
4 - 6	
6 - 8	
8 - 10	

10

According to the **frequency table** shown, which statement is **correct**?

A Dress shoes were purchased the most.
B Twice as many dress shoes were purchased than hiking boots.
C There are more snow boots than hiking boots.
D Sandals were purchased the least.

Footwear	Frequency
Sneakers	
Sandals	
Dress Shoes	
Hiking Boots	
Snow Boots	



ANSWER KEY

According to the **bar graph** shown, in which **state** are there the **most pools**?

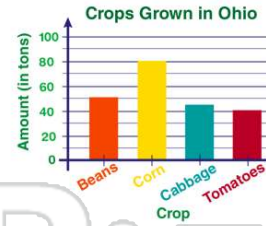
- A** New York
- B** Florida
- C** Georgia
- D** Pennsylvania



(b)

According to the **bar graph** shown, how much **more corn** is grown than cabbage?

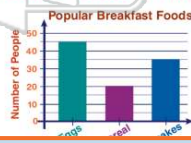
- A** 30 tons more
- B** 35 tons more
- C** 40 tons more
- D** 45 tons more



(b)

The **bar graph** shown represents the three most popular types of breakfast food liked by a survey of **100** people. **How many people liked eggs more than cereal?**

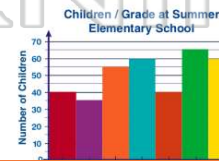
- A** 10 people
- B** 20 people
- C** 25 people
- D** 30 people



(c)

According to the **histogram** shown of Summer Elementary School, what **grade** has the **least number of children** in school?

- A** 1st grade
- B** 3rd grade
- C** 5th grade
- D** 6th grade



(a)



PREVIEW

Please [Sign In](#) or [Sign Up](#) to download the printable version of this worksheet

True or false?

- A** true
- B** false

10 - 14	
15 - 19	
20 - 24	
25 - 29	

shown is correct.

True or false?

- A** true
- B** false

1	
2	
3	
4	
5	

According to the **frequency table** shown, which statement is **correct**?

- A** The fewest watched 6-8 hrs.
- B** Twice as many watched 2-4 hrs than 8-10 hrs.
- C** Twice as many watched 4-6 hrs than 0-2 hrs.
- D** Half as many watched 6-8 hrs than 2-4 hrs.

Hours	Frequency
0 - 2	
2 - 4	
4 - 6	
6 - 8	
8 - 10	

(d)

According to the **frequency table** shown, which statement is **correct**?

- A** Dress shoes were purchased the most.
- B** Twice as many dress shoes were purchased than hiking boots.
- C** There are more snow boots than hiking boots.
- D** Sandals were purchased the least.

Footwear	Frequency
Sneakers	
Sandals	
Dress Shoes	
Hiking Boots	
Snow Boots	

(b)