



Name \_\_\_\_\_ Class \_\_\_\_\_ Date \_\_\_\_\_

1 **Plants** need \_\_\_\_\_ to grow.

- A animals
- B trees
- C rocks
- D water



2 How do plants **get water**?

- A from the rain
- B from trees
- C from grass
- D from rocks



3 What does a **plant** need to grow?

- A air
- B rocks
- C other plants
- D wind



4 What needs **sunlight** to grow?

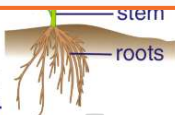
- A animals
- B plants
- C bugs
- D soil




## PREVIEW

Please [Sign In](#) or [Sign Up](#) to download the printable version of this worksheet

- 6
- B the stem of a plant
  - C the flower of a plant
  - D the leaves of a plant

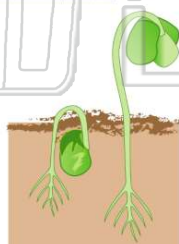


- 7
- B soil
  - C water
  - D flower petals




9 The **roots** grow

- A above the soil
- B toward the sky
- C into the soil
- D toward the Sun



10 What is the **arrow** pointing to?

- A the flower
- B the roots
- C the leaves
- D the stem





## ANSWER KEY

Plants need \_\_\_\_\_ to grow.

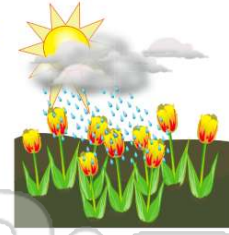
- A animals
- B trees
- C rocks
- D water



(d)

How do plants get water?

- A from the rain
- B from trees
- C from grass
- D from rocks



(a)

What does a plant need to grow?

- A air
- B rocks
- C other plants
- D wind



(a)

What needs sunlight to grow?

- A animals
- B plants
- C bugs
- D soil



(b)



## PREVIEW

Please [Sign In](#) or [Sign Up](#) to download the printable version of this worksheet

- C the flower of a plant
- D the leaves of a plant

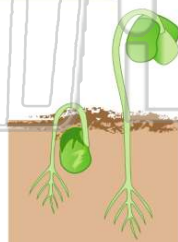


- C water
- D flower petals



The roots grow \_\_\_\_\_

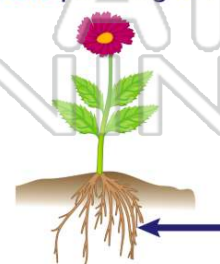
- A above the soil
- B toward the sky
- C into the soil
- D toward the Sun



(c)

What is the arrow pointing to?

- A the flower
- B the roots
- C the leaves
- D the stem



(b)