





## ANSWER KEY

What is the **arrow** pointing to?

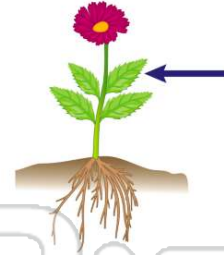
- A the roots
- B the leaves
- C the stem
- D the flower



(c)

What is the **arrow** pointing to?

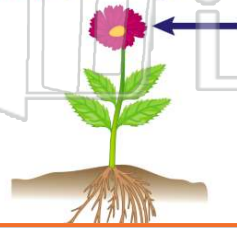
- A the leaf
- B the roots
- C the stem
- D the flower



(a)

What is the **arrow** pointing to?

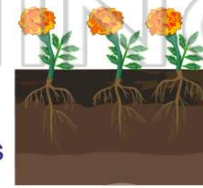
- A the leaves
- B the flower
- C the stem
- D the roots



(b)

What keeps a plant **in the soil**?

- A the plant's stem
- B the plant's flower
- C the plant's roots
- D the plant's leaves



(c)



## PREVIEW

Please [Sign In](#) or [Sign Up](#) to download the printable version of this worksheet

- B flower
- C leaves
- D stem



- C roots
- D flower



The **stem** helps the plant reach \_\_\_\_\_.

- A the soil
- B sunlight
- C rain
- D wind



(b)

What **color** is this plant?

- A purple
- B yellow
- C green
- D red



(c)