



Name \_\_\_\_\_ Class \_\_\_\_\_ Date \_\_\_\_\_

1 Which **nonliving** thing can be **hot** or **cold** and can **move**?

- A a tree
- B a plant
- C a squirrel
- D air



2 Plants use carbon dioxide and make **oxygen**. \_\_\_\_\_ is an important part of the **air we breathe**.

- A carbon
- B oxygen
- C carbon dioxide
- D wind



3 **Ferns** do **not** have flowers. They do **not** make seeds. They make **new plants** by using \_\_\_\_\_.

- A animals
- B petals



4 **Herbivores** are animals that **only eat** \_\_\_\_\_.

- A plants
- B other animals
- C water



## PREVIEW

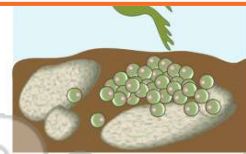
Please [Sign In](#) or [Sign Up](#) to download the printable version of this worksheet

7 \_\_\_\_\_  
\_\_\_\_\_  
\_\_\_\_\_  
\_\_\_\_\_  
\_\_\_\_\_

A A rock  
B A desert  
C A rainforest  
D The North Pole

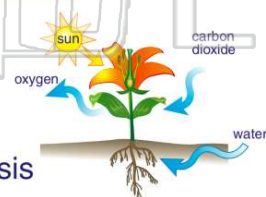


- C spoil
- D spots



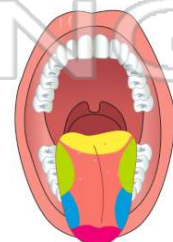
9 **Plants** make their own food. This is called \_\_\_\_\_.

- A photography
- B precipitation
- C classifying
- D photosynthesis



10 What part of your body helps you **taste** food?

- A your molars
- B your lungs
- C your taste buds
- D your teeth





## ANSWER KEY

Which **nonliving** thing can be **hot** or **cold** and can **move**?

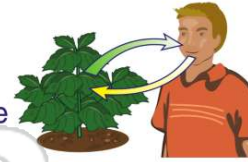
- A a tree
- B a plant
- C a squirrel
- D air



(d)

Plants use carbon dioxide and make **oxygen**. \_\_\_\_\_ is an important part of the **air we breathe**.

- A carbon
- B oxygen
- C carbon dioxide
- D wind



(b)

**Ferns** do **not** have flowers. They do **not** make seeds. They make **new plants** by using \_\_\_\_\_.

- A animals
- B petals
- C spores
- D \_\_\_\_\_



(c)

**Herbivores** are animals that **only eat** \_\_\_\_\_.

- A plants
- B other animals
- C water
- D soil



(a)



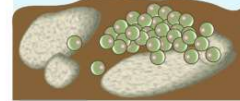
## PREVIEW

Please [Sign In](#) or [Sign Up](#) to download the printable version of this worksheet

- A A rock
- B A desert
- C A rainforest
- D The North Pole

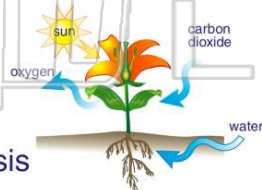


- D spots



**Plants** make their own food. This is called \_\_\_\_\_.

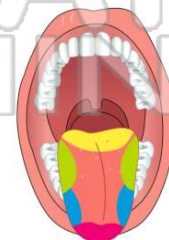
- A photography
- B precipitation
- C classifying
- D photosynthesis



(d)

What part of your body helps you **taste food**?

- A your molars
- B your lungs
- C your taste buds
- D your teeth



(c)