



Name _____ Class _____ Date _____

1 There are _____ **states of matter**: solid, liquid, and gas.

- A two
- B three
- C four
- D ten



2 Humans **breathe out** a gas called _____.

- A chlorophyll
- B minerals
- C oxygen
- D carbon dioxide



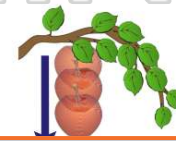
3 Some houses use **natural gas** to make **heat**. What is **natural gas** made out of?

- A water
- B plants and animals that died long ago



4 A **force** that **pulls everything toward the ground** is called _____.

- A light
- B gravity
- C soil



PREVIEW

Please [Sign In](#) or [Sign Up](#) to download the printable version of this worksheet

7

- A 10
- B 20
- C 100
- D 120

a whisper		10
train horn		100
jet plane		120

- B A dog barking
- C Lightning
- D A drum beating




9 In 1752, a man **flew a kite** during a storm. He discovered that **lightning** is a form of **electrical energy**. Who was this man?

- A Thomas Smith
- B Isaac Newton
- C Benjamin Franklin
- D George Washington



10 The **invisible field** around a **magnet** is called a _____.

- A magnet stop
- B magnetic field
- C sticky area
- D magnet zone





ANSWER KEY

There are _____ **states of matter**: solid, liquid, and gas.

- A two
- B three
- C four
- D ten



(b)

Humans **breathe out** a gas called _____.

- A chlorophyll
- B minerals
- C oxygen
- D carbon dioxide



(d)

Some houses use **natural gas** to make **heat**. What is **natural gas** made out of?

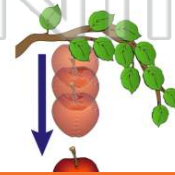
- A water
- B plants and animals that died long ago
- C rocks
- D



(b)

A **force** that **pulls everything toward the ground** is called _____.

- A light
- B gravity
- C soil
- D energy



(b)



PREVIEW

Please [Sign In](#) or [Sign Up](#) to download the printable version of this worksheet

- B 20
- C 100
- D 120

a whisper		10
train horn		100
jet plane		120

- C Lightning
- D A drum beating



In 1752, a man **flew a kite** during a storm. He discovered that **lightning** is a form of **electrical energy**. Who was this man?

- A Thomas Smith
- B Isaac Newton
- C Benjamin Franklin
- D George Washington



(c)

The **invisible field** around a **magnet** is called a _____.

- A magnet stop
- B magnetic field
- C sticky area
- D magnet zone



(b)