



Name _____ Class _____ Date _____

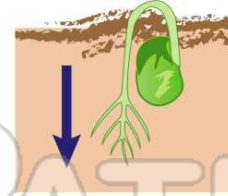
1 Inside a _____ is a **tiny new plant**.

- A root
- B stem
- C leaf
- D seed



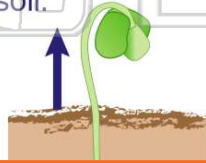
2 _____ **grow down** from a seed into the ground.

- A Leaves
- B Stems
- C Roots
- D Flowers



3 _____ **grows up** from a seed through the soil.

- A A stem
- B A leaf
- C A flower



4 When a plant **starts to grow**, it is called _____.

- A an egg
- B a seedling
- C a flower



PREVIEW

Please [Sign In](#) or [Sign Up](#) to download the printable version of this worksheet

7

A baby dolphin
C horse
D chicken



- B baby chick
- C baby cat
- D young plant



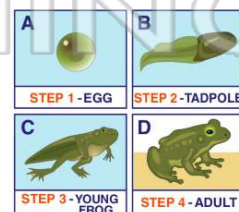
9 Chickens, butterflies, and frogs all **start** their life cycle as _____.

- A insects
- B eggs
- C seeds
- D young plants



10 Which box shows the **second step** of a frog's life cycle?

- A box A
- B box B
- C box C
- D box D





ANSWER KEY

Inside a _____ is a **tiny new plant**.

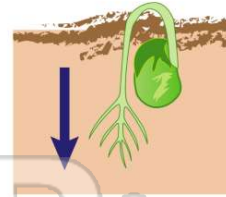
- A root
- B stem
- C leaf
- D seed



(d)

_____ **grow down** from a seed into the ground.

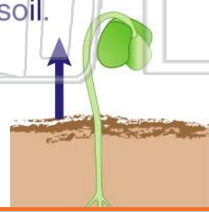
- A Leaves
- B Stems
- C Roots
- D Flowers



(c)

_____ **grows up** from a seed through the soil.

- A A stem
- B A leaf
- C A flower
- D A root



(a)

When a plant **starts to grow**, it is called _____.

- A an egg
- B a seedling
- C a flower
- D a root hair



(b)



PREVIEW

Please [Sign In](#) or [Sign Up](#) to download the printable version of this worksheet

- D chicken



- C baby cat
- D young plant



Chickens, butterflies, and frogs all **start** their life cycle as _____.

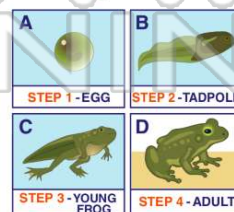
- A insects
- B eggs
- C seeds
- D young plants



(b)

Which box shows the **second step** of a frog's life cycle?

- A box A
- B box B
- C box C
- D box D



(b)