




Name _____ Class _____ Date _____


1 The **brightness** that comes from some objects, like the Sun, is called _____.

- A speed
- B light
- C sound
- D volume



2 Which object is a **source of light and heat**?

- A a tree
- B a rock
- C a fire
- D a wall



3 The **Earth** gets most of its **light** from _____.

- A the Sun
- B the Moon
- C stars



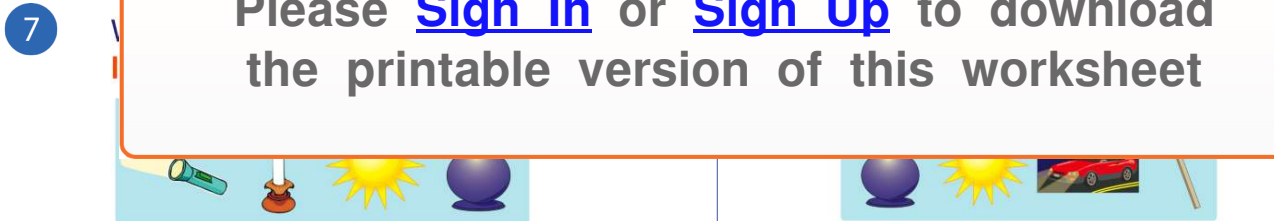
4 How does **light travel**?

- A to the left
- B to the right
- C in a curved line
- D in a straight line



PREVIEW

Please [Sign In](#) or [Sign Up](#) to download the printable version of this worksheet



- A a flashlight
- B a candle
- C the Sun
- D a lamp

- A a lamp
- B the Sun
- C car headlights
- D a match

9 Which **time of day** would you need to **turn on a light** inside your house so you could see?

- A 10:00 a.m.
- B 1:00 p.m.
- C 3:00 p.m.
- D 11:00 p.m.



10 **Plants** get **energy** from the Sun.

- A yes
- B no






ANSWER KEY

The **brightness** that comes from some objects, like the Sun, is called _____.


- A** speed
- B** light
- C** sound
- D** volume



(b)

Which object is a **source of light and heat**?

- A** a tree
- B** a rock
- C** a fire
- D** a wall



(c)

The **Earth** gets most of its **light** from _____.

- A** the Sun
- B** the Moon
- C** stars
- D** fire



(a)

How does **light travel**?

- A** to the left
- B** to the right
- C** in a curved line
- D** in a straight line



(d)



PREVIEW

Please [Sign In](#) or [Sign Up](#) to download the printable version of this worksheet

- A** a flashlight
- B** a candle
- C** the Sun
- D** a lamp

- A** a lamp
- B** the Sun
- C** car headlights
- D** a match

Which **time of day** would you need to **turn on a light** inside your house so you could see?

- A** 10:00 a.m.
- B** 1:00 p.m.
- C** 3:00 p.m.
- D** 11:00 p.m.



(d)

Plants get **energy** from the Sun.

- A** yes
- B** no



(a)