



Name _____ Class _____ Date _____

1 Scientists know that **one rotation** of the earth takes **one day** or _____.

- A 2 hours
- B 4 hours
- C 24 hours
- D 48 hours



3 This chart shows if an object is **magnetic or not**.

- A true
- B false

Item	Attracted by Magnet?
paper clip	yes
plastic spoon	no

4 Look at the chart. Which items are **attracted by a magnet**?

- A 5
- B 6
- C 7
- D 9

Monday	Tuesday	Wednesday	Thursday	Friday
5	7	9	13	6

- A paper clip and plastic spoon
- B iron nail and feather



PREVIEW

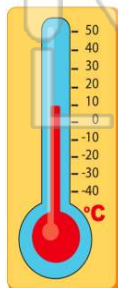
7 Please [Sign In](#) or [Sign Up](#) to download the printable version of this worksheet

- B key and rock
- C cork and key
- D rock and wood

- A 3 centimeters (cm)
- B 10 centimeters (cm)
- C 15 centimeters (cm)
- D 300 centimeters (cm)

9 This **thermometer** shows that it is _____ outside.

- A 0°C
- B 10°C
- C 25°C
- D 30°C



10 It rained **5 centimeters** on Monday and **6 centimeters** on Tuesday. How many centimeters did it rain **all together**?

- A 1 centimeter
- B 11 centimeters
- C 50 centimeters
- D 65 centimeters





ANSWER KEY

Scientists know that **one rotation** of the earth takes **one day** or _____.

- A 2 hours
- B 4 hours
- C 24 hours
- D 48 hours



(C)

How many **bottles** did Mrs. Kane's class collect on **Friday**?

- A 5
- B 6
- C 7
- D 9

Mrs. Kane's Bottle Collection				
Monday	Tuesday	Wednesday	Thursday	Friday
5	7	9	13	6

(b)

This chart shows if an object is **magnetic or not**.

- A true
- B false

Item	Attracted by Magnet?
paper clip	yes
plastic spoon	no
iron nail	yes
feather	no

(a)

Look at the chart. Which items are **attracted by a magnet**?

Item	Attracted by Magnet?
paper clip	yes
plastic spoon	no
iron nail	yes
feather	no

(C)

- A paper clip and plastic spoon
- B iron nail and feather
- C paper clip and iron nail



PREVIEW

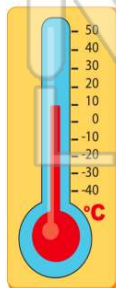
Please [Sign In](#) or [Sign Up](#) to download the printable version of this worksheet

- C cork and key
- D rock and wood

- B 10 centimeters (cm)
- C 15 centimeters (cm)
- D 300 centimeters (cm)

This **thermometer** shows that it is _____ outside.

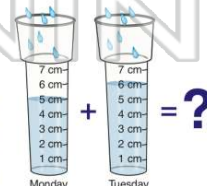
- A 0°C
- B 10°C
- C 25°C
- D 30°C



(b)

It rained **5 centimeters** on Monday and **6 centimeters** on Tuesday. How many centimeters did it rain **all together**?

- A 1 centimeter
- B 11 centimeters
- C 50 centimeters
- D 65 centimeters



(b)