




Name _____ Class _____ Date _____

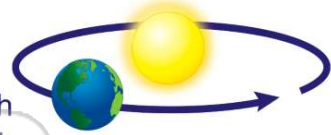
1 The Earth moves **around** _____ in a **big circle**.

- A the Sun
- B the Moon
- C Mars
- D Pluto



2 The Earth **moves in a path** around the Sun. What is this **path** called?

- A a day
- B a turn
- C a switch
- D an orbit



3 When the **Sun is out**, we can also see _____.

- A stars and planets
- B clouds, blue sky, and light



4 **Earth spins** _____ around each day.

- A once
- B twice
- C three times



PREVIEW

7 Please [Sign In](#) or [Sign Up](#) to download the printable version of this worksheet

True or false?

- A true
- B false



- C the Moon
- D Mercury



9 How **many moons** does Earth have?

- A four
- B three
- C two
- D one



10 Do **all planets** have only **one moon**?

- A yes
- B no






ANSWER KEY

The Earth moves **around** _____ in a **big circle**.

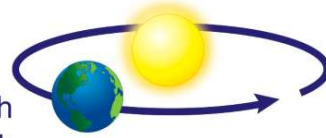
- A** the Sun
- B** the Moon
- C** Mars
- D** Pluto



(a)

The Earth **moves in a path** around the Sun. What is this **path** called?

- A** a day
- B** a turn
- C** a switch
- D** an orbit



(d)

When the **Sun is out**, we can also see _____

- A** stars and planets
- B** clouds, blue sky, and light
- C** a black sky and stars



(b)

Earth spins _____ around each day.

- A** once
- B** twice
- C** three times
- D** four times



(a)



PREVIEW

Please [Sign In](#) or [Sign Up](#) to download the printable version of this worksheet

- A** true
- B** false



- D** Mercury



How **many moons** does Earth have?

- A** four
- B** three
- C** two
- D** one



(d)

Do **all planets** have only **one moon**?

- A** yes
- B** no



(b)