



Name _____ Class _____ Date _____

1 _____ is a **flash of light** in the sky that you can see during a **thunderstorm**.



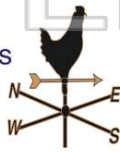
- A Lightening
- B Thunder
- C Tornado
- D Hurricane

2 This season comes after summer. The leaves on some trees **change color** and fall to the ground. Which **season** is it?



- A winter
- B spring
- C summer
- D fall

3 What would you use a **wind vane** to do?



- A to tell how cold the wind is
- B to find out how hard the wind is blowing
- C to find out what direction

4 During this season plants begin to grow. The weather starts to warm up but it can be very **rainy**. Which **season** is it?



- A winter
- B spring



PREVIEW

Please [Sign In](#) or [Sign Up](#) to download the printable version of this worksheet

7
A blizzard
B blizzard
C tornado
D thunderstorm




8
A water in a glass
B water in a glass
C water vapor
D rain



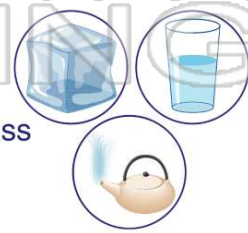
9 Which one is water that is in **liquid** form?

- A ice cube
- B water in a glass
- C water vapor
- D snow



10 Which one is water that is in **solid** form?

- A ice cube
- B water in a glass
- C water vapor
- D rain





ANSWER KEY

_____ is a **flash of light** in the sky that you can see during a **thunderstorm**.



- A** Lightening
- B** Thunder
- C** Tornado
- D** Hurricane

(a)

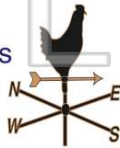
This season comes after summer. The leaves on some trees **change color** and fall to the ground. Which **season** is it?



- A** winter
- B** spring
- C** summer
- D** fall

(d)

What would you use a **wind vane** to do?



- A** to tell how cold the wind is
- B** to find out how hard the wind is blowing
- C** to find out what direction the wind is blowing

(c)

During this season plants begin to grow. The weather starts to warm up but it can be very **rainy**. Which **season** is it?



- A** winter
- B** spring
- C** summer

(b)



PREVIEW

Please [Sign In](#) or [Sign Up](#) to download the printable version of this worksheet

- C** tornado
- D** thunderstorm



- C** water vapor
- D** rain



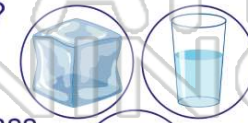
Which one is water that is in **liquid** form?



- A** ice cube
- B** water in a glass
- C** water vapor
- D** snow

(b)

Which one is water that is in **solid** form?



- A** ice cube
- B** water in a glass
- C** water vapor
- D** rain

(a)