




Name _____ Class _____ Date _____

- 1 What does it mean to make a **prediction**?
- A** to see what happened
B to tell what you think is going to happen
C to tell what you know for sure will happen
D to do an experiment
- 

- 2 These **shapes** show _____.



- A** a pattern
B a line
C a large number
D a letter

- 3 Scientists use many tools when they are making observations. **This tool for measuring length is called**



- A** a balance
B a thermometer

- 4 A **ruler** is used to _____.



- A** weigh objects
B balance objects
C find how much liquid is in a cup
D measure the length of objects



PREVIEW

Please [Sign In](#) or [Sign Up](#) to download the printable version of this worksheet

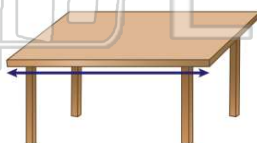
- 7
- A** a balance
B a meterstick
C a thermometer
D a scale



- A** to measure the weight of objects
B to measure the length of objects
C to see if an object will float
D to measure the color of objects

- 9 What tool would you use to measure the **length of a table**?

- A** a clock
B a measuring cup
C a balance
D a meterstick



- 10 This is a **tool** that scientists use to measure **liquids**. **What is the name of this tool?**



- A** a measuring cup
B a balance
C a clock
D a ruler



ANSWER KEY

What does it mean to make a **prediction**?



- A** to see what happened
- B** to tell what you think is going to happen
- C** to tell what you know for sure will happen
- D** to do an experiment

(b)


These **shapes** show _____.



- A** a pattern
- B** a line
- C** a large number
- D** a letter

(a)

Scientists use many tools when they are making observations. **This tool for measuring length** is called _____.



- A** a balance
- B** a thermometer
- C** a ruler
- D** a scale

(c)

A **ruler** is used to _____.

- A** weigh objects
- B** balance objects
- C** find how much liquid is in a cup
- D** measure the length of objects



(d)



PREVIEW

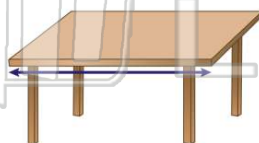
Please [Sign In](#) or [Sign Up](#) to download the printable version of this worksheet

- B** a meterstick
- C** a thermometer
- D** a scale



- B** to measure the length of objects
- C** to see if an object will float
- D** to measure the color of objects

What tool would you use to measure the **length** of a **table**?



- A** a clock
- B** a measuring cup
- C** a balance
- D** a meterstick

(d)

This is a **tool** that scientists use to measure **liquids**. **What is the name of this tool?**



- A** a measuring cup
- B** a balance
- C** a clock
- D** a ruler

(a)