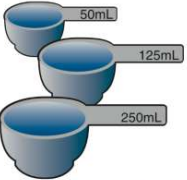





Name _____ Class _____ Date _____

1 What is a **measuring cup** used for?




A to measure the weight of an object
B to measure the height of an object
C to measure the length of an object
D to measure an amount of liquid

2 What tool would you use to **measure** how much **liquid** there is in this container?




A a balance
B a ruler
C a measuring cup
D a meterstick

3 One milliliter (mL) is a tiny drop of water. How much water is in this **measuring cup**?



A 15 mL
B 100 mL

4 This is a **tool** that scientists use to **measure time**. What is the name of this **tool**?



A a clock
B a ruler


5



PREVIEW

Please [Sign In](#) or [Sign Up](#) to download the printable version of this worksheet


6

an object up close 
B measure the length of an object
C measure the weight of an object
D see details of an object far away

7

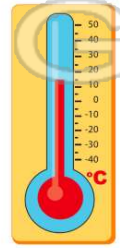
A a balance
B a hand lens 
C a measuring cup
D a clock

9 This is a **tool** that scientists use to **measure temperature**. What is the name of this **tool**?



A a hand lens
B a thermometer
C a measuring cup
D a ruler

10 What is a **thermometer** used for?

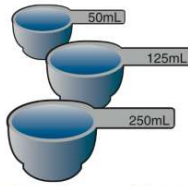


A to measure length
B to measure an amount of liquid
C to weigh an object
D to find out what the temperature is



ANSWER KEY

What is a **measuring cup** used for?



- A** to measure the weight of an object
- B** to measure the height of an object
- C** to measure the length of an object
- D** to measure an amount of liquid

(d)

What tool would you use to **measure** how much **liquid** there is in this container?



- A** a balance
- B** a ruler
- C** a measuring cup
- D** a meterstick

(c)

One milliliter (mL) is a tiny drop of water. How much water is in this **measuring cup**?



- A** 15 mL
- B** 100 mL
- C** 150 mL

(c)

This is a **tool** that scientists use to **measure time**. What is the name of this **tool**?



- A** a clock
- B** a ruler
- C** a measuring cup

(a)



PREVIEW

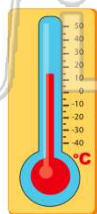
Please [Sign In](#) or [Sign Up](#) to download the printable version of this worksheet

- B** measure the length of an object
- C** measure the weight of an object
- D** see details of an object far away

- B** a hand lens
- C** a measuring cup
- D** a clock



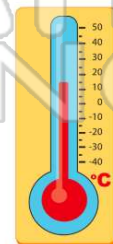
This is a **tool** that scientists use to **measure temperature**. What is the name of this **tool**?



- A** a hand lens
- B** a thermometer
- C** a measuring cup
- D** a ruler

(b)

What is a **thermometer** used for?



- A** to measure length
- B** to measure an amount of liquid
- C** to weigh an object
- D** to find out what the temperature is

(d)