



Name _____ Class _____ Date _____

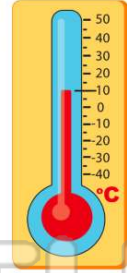
1 What **tool** would you use to see what the **temperature** is outside?

- A a hand lens
- B a thermometer
- C a measuring cup
- D a balance



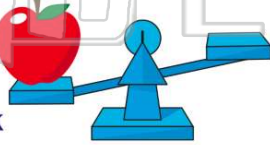
2 What **temperature** does this thermometer show?

- A 5° Celsius
- B 10° Celsius
- C 15° Celsius
- D 25° Celsius



3 What **scientific tool** is pictured below?

- A a balance
- B a meterstick
- C a hand lens



4 What is a **balance** used for?

- A to see something up close
- B to measure an amount of liquid
- C to see how tall something is



PREVIEW

Please [Sign In](#) or [Sign Up](#) to download the printable version of this worksheet

7

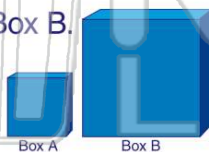
8

by their color
by their size
by their wrapper

- A how tall something is
- B how much something weighs
- C how something feels
- D how something smells

9 Compare Box A to Box B. What **difference** do you notice?

- A They smell different.
- B They are different shapes.
- C They are different colors.
- D They are different sizes.



10 Which animal **weighs the most**?

- A a horse
- B an elephant
- C a hawk
- D a mouse





ANSWER KEY

What **tool** would you use to see what the **temperature** is outside?

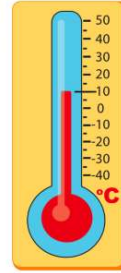
- A a hand lens
- B a thermometer
- C a measuring cup
- D a balance



(b)

What **temperature** does this thermometer show?

- A 5° Celsius
- B 10° Celsius
- C 15° Celsius
- D 25° Celsius



(b)

What **scientific tool** is pictured below?

- A a balance
- B a meterstick
- C a hand lens
- D a microscope



(a)

What is a **balance** used for?

- A to see something up close
- B to measure an amount of liquid
- C to see how tall something is
- D to measure the weight of



(d)



PREVIEW

Please [Sign In](#) or [Sign Up](#) to download the printable version of this worksheet

D by their wrapper

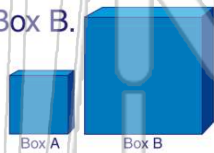


- B how much something weighs
- C how something feels
- D how something smells

Compare Box A to Box B.

What **difference** do you notice?


- A They smell different.
- B They are different shapes.
- C They are different colors.
- D They are different sizes.



(d)

Which animal **weighs the most**?

- A a horse
- B an elephant
- C a hawk
- D a mouse



(b)